

Last Name	First Name	MI
Student ID Number:		Total Score
Circle the name of your TA: CARI HEATHER RYAN KAUSHIK		
Discussion Section – Day:	Time:	

Chem 30A Fall 2005

QUIZ #2A (15 Min)

Weds Nov 9th

INTERPRETATION OF THE QUESTIONS IS PART OF THE EXAM – DO NOT ASK FOR THE QUESTIONS TO BE EXPLAINED TO YOU

USE CAPITAL LETTERS WHEN FILLING IN THE BOXES AND BE CLEAR – IF WE CAN'T FIGURE OUT WHAT A LETTER IS, IT WILL AUTOMATICALLY BE GRADED AS INCORRECT

****DO NOT OPEN THIS EXAM UNTIL INSTRUCTED TO DO SO****

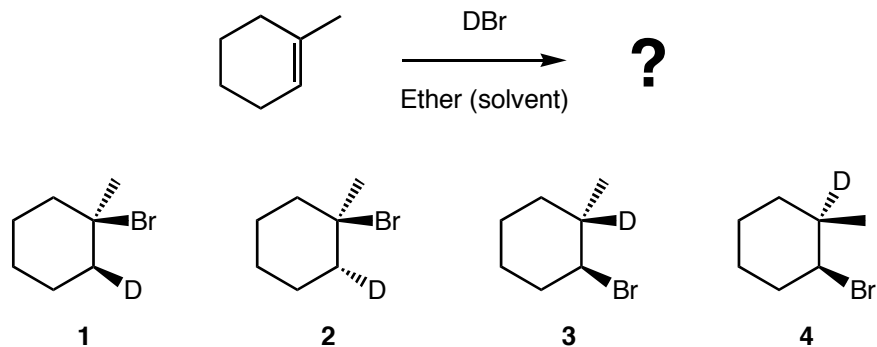
Q	1	2	3	4	5	6	7	8	9	10	Total
X											
ANSWER TO BONUS QUESTION											

Here's a warm welcome to all the intelligent life forms out there. And to the rest of you... the trick is to bang the rocks together, guys.

– Douglas Adams

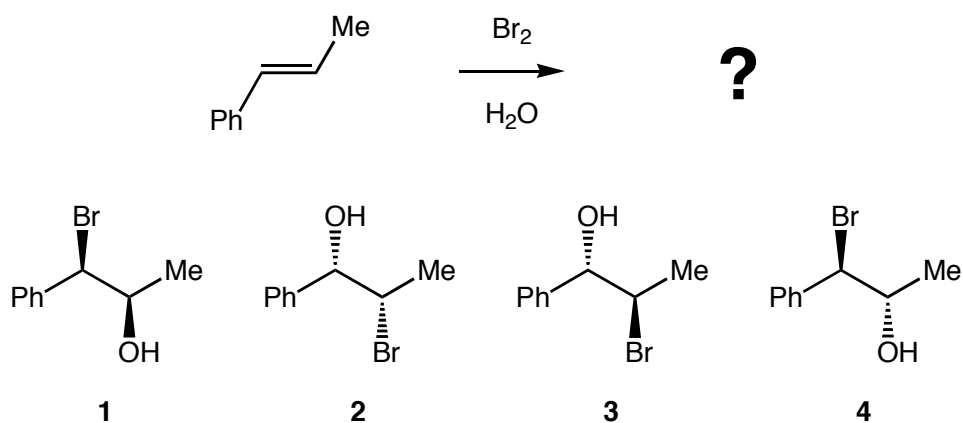
Questions 1–10 are worth 3 points each. The bonus is worth 5 points.

1. Assuming that the reaction of 1-methylcyclohexene with D-Br (the deuterium labelled version of H-Br) proceeds with absolute Markovnikov selectivity, what will the major product(s) of the reaction be?



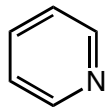
- A Only 1 and 3
- B Only 1 and 2
- C Only 2 and 4
- D All of them
- E Only 3 and 4

2. The major product(s) of the reaction of the *trans*-alkene shown below with bromine in water are?



- A Only 2
- B Only 3
- C Only 1 and 4
- D Only 3 and 4
- E Only 2 and 3

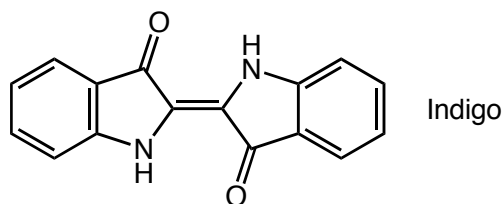
3. Pyridine, shown below, is most accurately described as:



Pyridine

- A** A Lewis acid and a Lewis base
- B** A Lewis base and a Bronsted base
- C** A Lewis acid and a Bronsted base
- D** A Bronsted base but NOT a Lewis base
- E** A Lewis base but NOT a Bronsted base

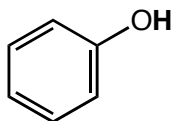
4. What is the Index of Hydrogen Deficiency (number of double bond equivalents) for the compound drawn below?



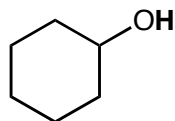
Indigo

- A** 7
- B** 9
- C** 11
- D** 13
- E** 15

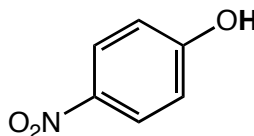
5. What is the order of acidity (from lowest pK_a value to highest pK_a value) of the bold hydrogen (H) atoms shown highlighted in the compounds drawn below?



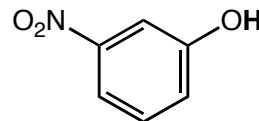
1



2



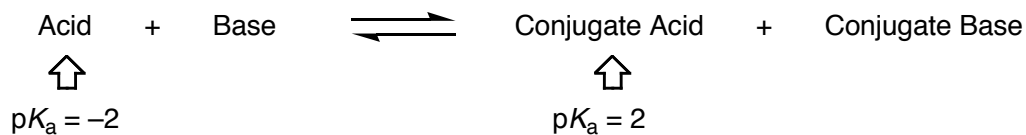
3



4

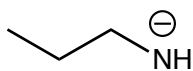
- A** 3, 4, 1, 2
- B** 2, 1, 4, 3
- C** 4, 3, 1, 2
- D** 1, 3, 4, 2
- E** 2, 1, 4, 3

6. The equilibrium constant (K_{eq}) for the reaction shown below is...?

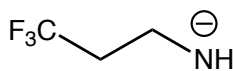


- A** 0
- B** 10000
- C** 4
- D** -1
- E** 0.0001

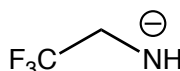
7. What is the order of basicity (from least basic to most basic) of the nitrogen-based anions drawn below?



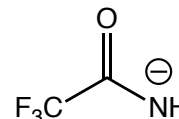
1



2



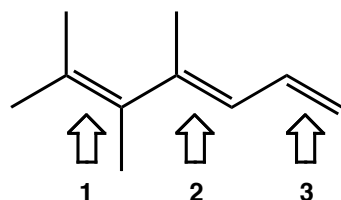
3



4

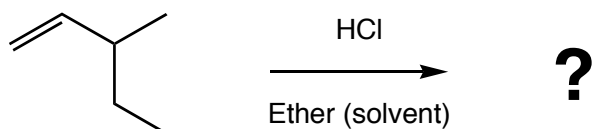
- A** 1, 2, 3, 4 **B** 3, 2, 1, 4 **C** 4, 3, 2, 1 **D** 4, 1, 2, 3 **E** 3, 4, 2, 1

8. For the triene shown below, for which double bond(s) is it possible to assign *E* or *Z* descriptors?




- A** 1, 2, and 3
B Only 1 and 2
C Only 2 and 3
D Only 2
E Only 1

9. What is the major product of the reaction shown below?



- A** 1-chloro-3-methylpentane
B 2-chloro-3-ethylbutane
C 3-chloro-2-methylpentane
D 2-chloro-3-methylpentane
E 3-chloro-3-methylpentane

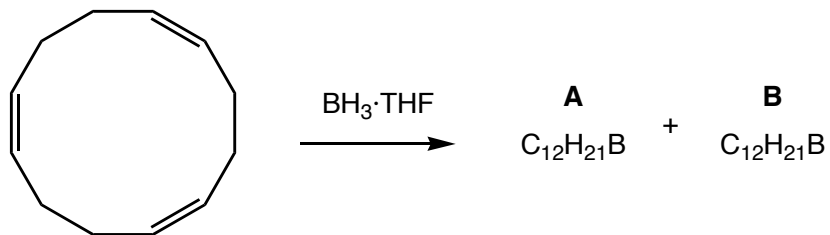
10. Which combination(s) of reagents would give rise to the reaction shown below?



- #1** (i) $\text{BH}_3 \cdot \text{THF}$ (ii) $\text{H}_2\text{O}_2 / \text{NaOH}$ **#2** (i) $\text{Hg}(\text{OAc})_2 / \text{H}_2\text{O}$ (ii) NaBH_4 **#3** $\text{H}_2\text{O} / \text{H}_2\text{SO}_4(\text{cat.})$

- A** #1, #2, and #3 **B** Only #1 **C** Only #2 **D** Only #3 **E** Only #2 and #3

BONUS: 1,5,9-Cyclododecatriene reacts with borane·THF to form two different compounds (**A** and **B**) with the formula $C_{12}H_{21}B$. Neither **A** nor **B** contains any B–H bonds. On the FRONT PAGE of this quiz, fill in the structures of **A** and **B**, and indicate which one is likely to be formed in higher yield.



***** End of Quiz *****

Last Name	First Name	MI
Student ID Number:		Total Score
Circle the name of your TA: CARI HEATHER RYAN KAUSHIK		
Discussion Section – Day:	Time:	

Chem 30A Fall 2005

QUIZ #2B (15 Min)

Weds Nov 9th

INTERPRETATION OF THE QUESTIONS IS PART OF THE EXAM – DO NOT ASK FOR THE QUESTIONS TO BE EXPLAINED TO YOU

USE CAPITAL LETTERS WHEN FILLING IN THE BOXES AND BE CLEAR – IF WE CAN'T FIGURE OUT WHAT A LETTER IS, IT WILL AUTOMATICALLY BE GRADED AS INCORRECT

******DO NOT OPEN THIS EXAM UNTIL INSTRUCTED TO DO SO******

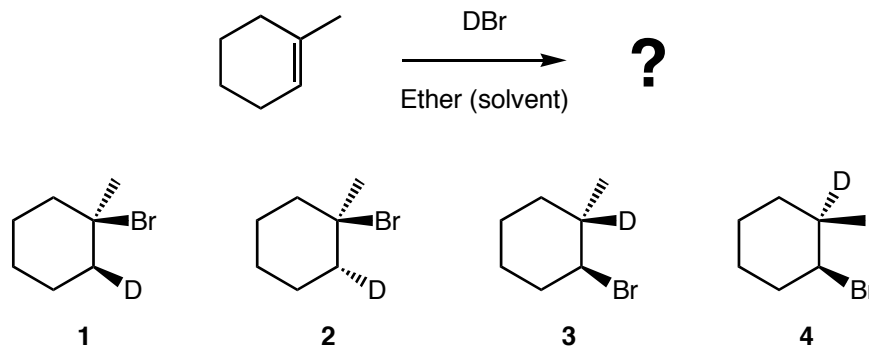
Q	1	2	3	4	5	6	7	8	9	10	Total
X											
ANSWER TO BONUS QUESTION											

Here's a warm welcome to all the intelligent life forms out there. And to the rest of you... the trick is to bang the rocks together, guys.

– Douglas Adams

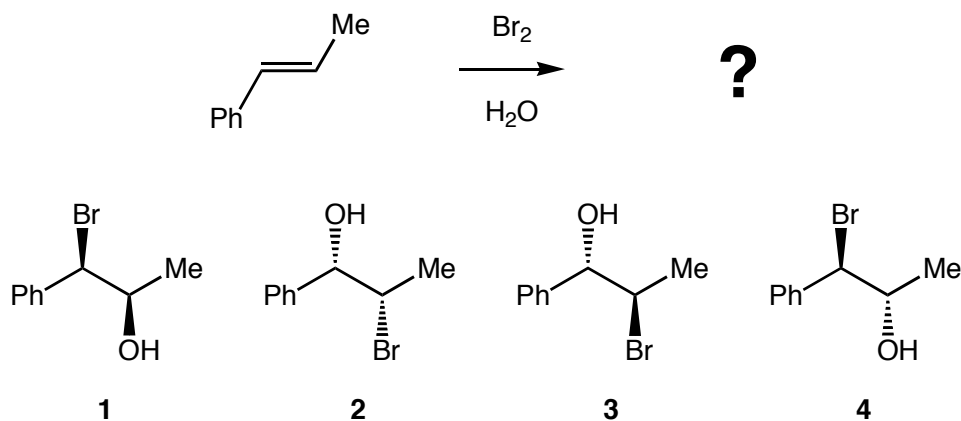
Questions 1–10 are worth 3 points each. The bonus is worth 5 points.

1. Assuming that the reaction of 1-methylcyclohexene with D-Br (the deuterium labelled version of H-Br) proceeds with absolute Markovnikov selectivity, what will the major product(s) of the reaction be?



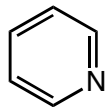
- A Only 3 and 4
- B Only 2 and 4
- C Only 1 and 2
- D All of them
- E Only 1 and 3

2. The major product(s) of the reaction of the *trans*-alkene shown below with bromine in water are?



- A Only 2 and 3
- B Only 2
- C Only 3
- D Only 1 and 4
- E Only 3 and 4

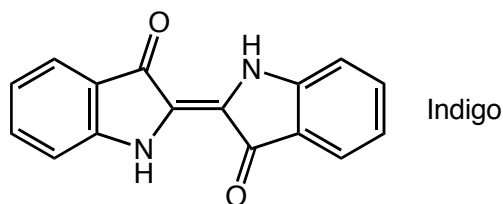
3. Pyridine, shown below, is most accurately described as:



Pyridine

- A** A Lewis base and a Bronsted base
- B** A Lewis acid and a Bronsted base
- C** A Bronsted base but NOT a Lewis base
- D** A Lewis base but NOT a Bronsted base
- E** A Lewis acid and a Lewis base

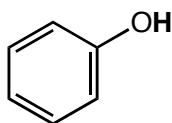
4. What is the Index of Hydrogen Deficiency (number of double bond equivalents) for the compound drawn below?



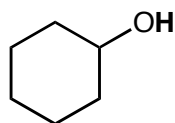
Indigo

- A** 15
- B** 13
- C** 11
- D** 9
- E** 7

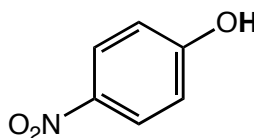
5. What is the order of acidity (from lowest pK_a value to highest pK_a value) of the bold hydrogen (H) atoms shown highlighted in the compounds drawn below?



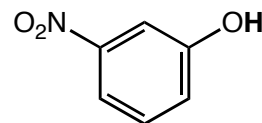
1



2



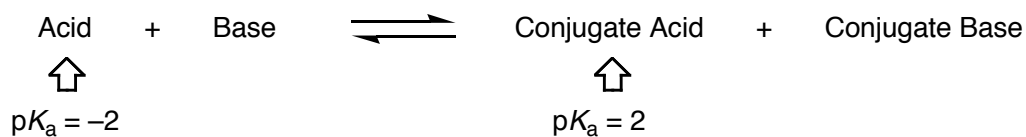
3



4

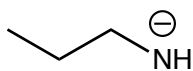
- A** 2, 1, 4, 3
- B** 1, 3, 4, 2
- C** 4, 3, 1, 2
- D** 2, 1, 4, 3
- E** 3, 4, 1, 2

6. The equilibrium constant (K_{eq}) for the reaction shown below is...?

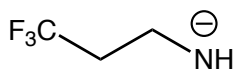


- A** 10000
- B** 0
- C** -1
- D** 4
- E** 0.0001

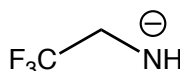
7. What is the order of basicity (from least basic to most basic) of the nitrogen-based anions drawn below?



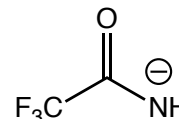
1



2



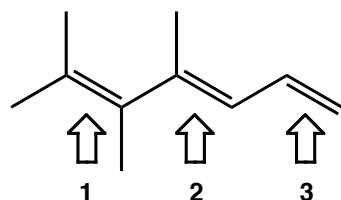
3



4

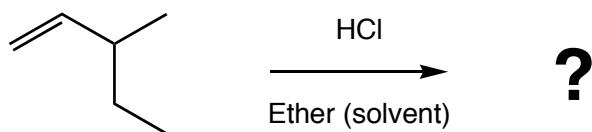
- A** 4, 3, 2, 1 **B** 3, 2, 1, 4 **C** 1, 2, 3, 4 **D** 4, 1, 2, 3 **E** 3, 4, 2, 1

8. For the triene shown below, for which double bond(s) is it possible to assign *E* or *Z* descriptors?




- A** 1, 2, and 3
B Only 2 and 3
C Only 1 and 2
D Only 1
E Only 2

9. What is the major product of the reaction shown below?



- A** 1-chloro-3-methylpentane
B 2-chloro-3-ethylbutane
C 3-chloro-3-methylpentane
D 3-chloro-2-methylpentane
E 2-chloro-3-methylpentane

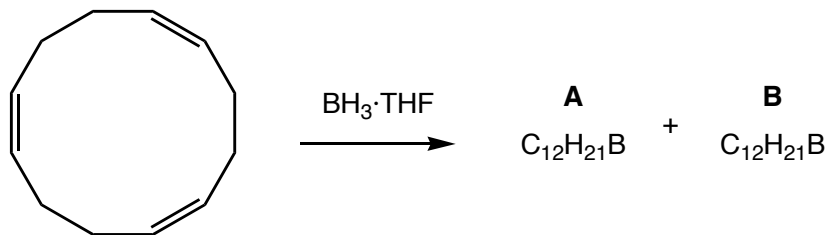
10. Which combination(s) of reagents would give rise to the reaction shown below?



- #1** (i) $\text{BH}_3 \cdot \text{THF}$ (ii) $\text{H}_2\text{O}_2 / \text{NaOH}$ **#2** (i) $\text{Hg}(\text{OAc})_2 / \text{H}_2\text{O}$ (ii) NaBH_4 **#3** $\text{H}_2\text{O} / \text{H}_2\text{SO}_4(\text{cat.})$

- A** #1, #2, and #3 **B** Only #3 **C** Only #2 and #3 **D** Only #1 **E** Only #2

BONUS: 1,5,9-Cyclododecatriene reacts with borane·THF to form two different compounds (**A** and **B**) with the formula $C_{12}H_{21}B$. Neither **A** nor **B** contains any B–H bonds. On the FRONT PAGE of this quiz, fill in the structures of **A** and **B**, and indicate which one is likely to be formed in higher yield.



***** End of Quiz *****

Last Name	First Name	MI
Student ID Number:		Total Score
Circle the name of your TA: CARI HEATHER RYAN KAUSHIK		
Discussion Section – Day:	Time:	

Chem 30A Fall 2005

QUIZ #2C (15 Min)

Weds Nov 9th

INTERPRETATION OF THE QUESTIONS IS PART OF THE EXAM – DO NOT ASK FOR THE QUESTIONS TO BE EXPLAINED TO YOU

USE CAPITAL LETTERS WHEN FILLING IN THE BOXES AND BE CLEAR – IF WE CAN'T FIGURE OUT WHAT A LETTER IS, IT WILL AUTOMATICALLY BE GRADED AS INCORRECT

******DO NOT OPEN THIS EXAM UNTIL INSTRUCTED TO DO SO******

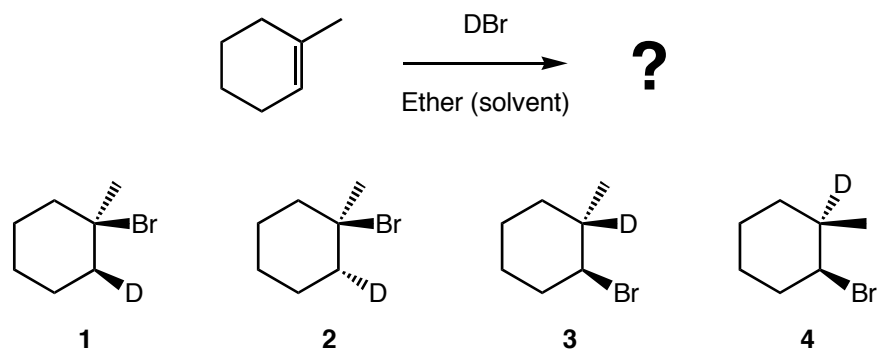
Q	1	2	3	4	5	6	7	8	9	10	Total
X											
ANSWER TO BONUS QUESTION											

Here's a warm welcome to all the intelligent life forms out there. And to the rest of you... the trick is to bang the rocks together, guys.

– Douglas Adams

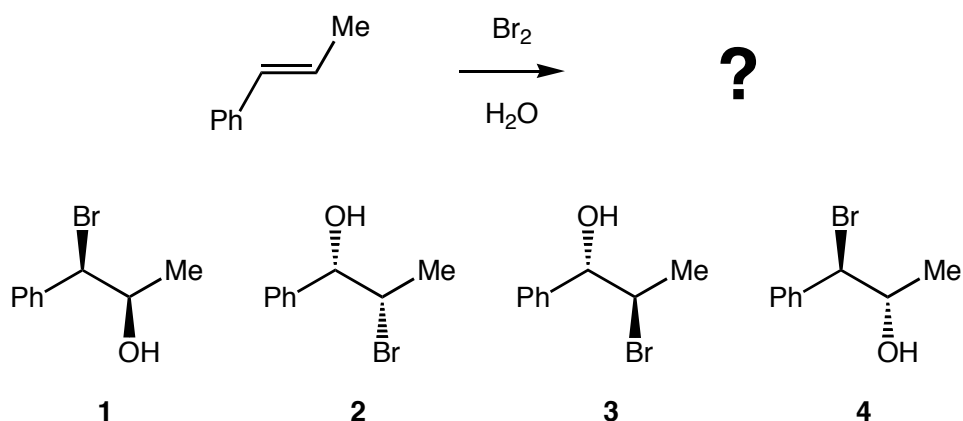
Questions 1–10 are worth 3 points each. The bonus is worth 5 points.

1. Assuming that the reaction of 1-methylcyclohexene with D-Br (the deuterium labelled version of H-Br) proceeds with absolute Markovnikov selectivity, what will the major product(s) of the reaction be?



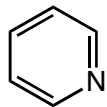
- A Only 1 and 3
- B Only 2 and 4
- C Only 3 and 4
- D Only 1 and 2
- E All of them

2. The major product(s) of the reaction of the *trans*-alkene shown below with bromine in water are?



- A Only 2 and 3
- B Only 2
- C Only 3 and 4
- D Only 1 and 4
- E Only 3

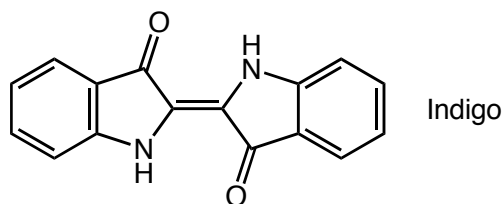
3. Pyridine, shown below, is most accurately described as:



Pyridine

- A** A Lewis acid and a Lewis base
- B** A Lewis acid and a Bronsted base
- C** A Bronsted base but NOT a Lewis base
- D** A Lewis base but NOT a Bronsted base
- E** A Lewis base and a Bronsted base

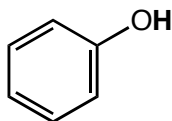
4. What is the Index of Hydrogen Deficiency (number of double bond equivalents) for the compound drawn below?



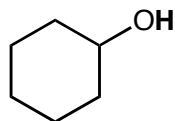
Indigo

- A** 13 **B** 15 **C** 9 **D** 11 **E** 7

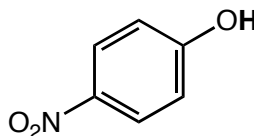
5. What is the order of acidity (from lowest pK_a value to highest pK_a value) of the bold hydrogen (H) atoms shown highlighted in the compounds drawn below?



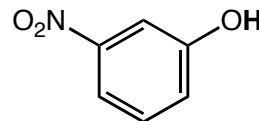
1



2



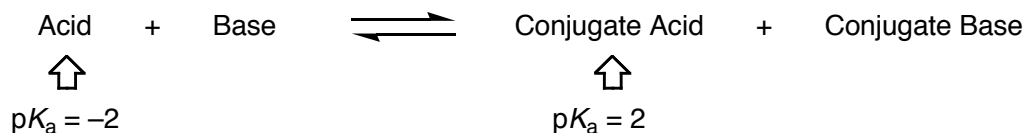
3



4

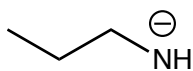
- A** 2, 1, 4, 3 **B** 1, 3, 4, 2 **C** 3, 4, 1, 2 **D** 2, 1, 4, 3 **E** 4, 3, 1, 2

6. The equilibrium constant (K_{eq}) for the reaction shown below is...?

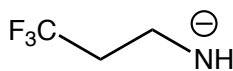


- A** 0.0001 **B** 0 **C** -1 **D** 4 **E** 10000

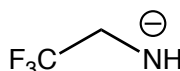
7. What is the order of basicity (from least basic to most basic) of the nitrogen-based anions drawn below?



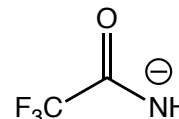
1



2



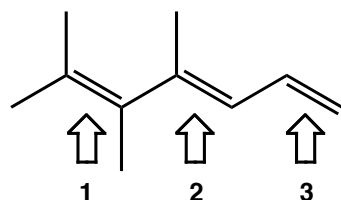
3



4

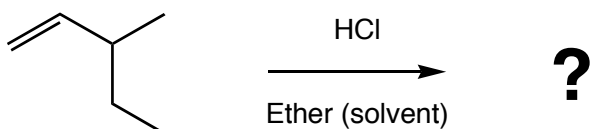
- A** 3, 2, 1, 4 **B** 4, 3, 2, 1 **C** 1, 2, 3, 4 **D** 4, 1, 2, 3 **E** 3, 4, 2, 1

8. For the triene shown below, for which double bond(s) is it possible to assign *E* or *Z* descriptors?




- A** 1, 2, and 3
B Only 2
C Only 1 and 2
D Only 1
E Only 2 and 3

9. What is the major product of the reaction shown below?



- A** 3-chloro-3-methylpentane
B 2-chloro-3-ethylbutane
C 1-chloro-3-methylpentane
D 3-chloro-2-methylpentane
E 2-chloro-3-methylpentane

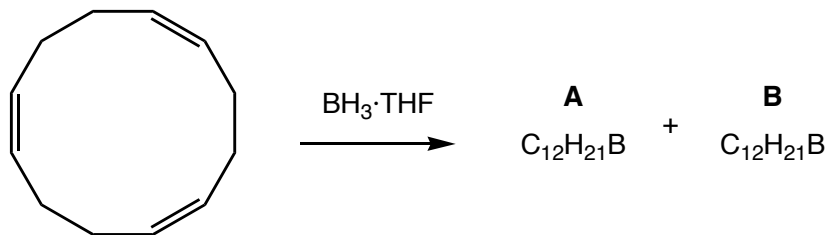
10. Which combination(s) of reagents would give rise to the reaction shown below?



- #1** (i) $\text{BH}_3 \cdot \text{THF}$ (ii) $\text{H}_2\text{O}_2 / \text{NaOH}$ **#2** (i) $\text{Hg}(\text{OAc})_2 / \text{H}_2\text{O}$ (ii) NaBH_4 **#3** $\text{H}_2\text{O} / \text{H}_2\text{SO}_4(\text{cat.})$

- A** #1, #2, and #3 **B** Only #2 and #3 **C** Only #3 **D** Only #1 **E** Only #2

BONUS: 1,5,9-Cyclododecatriene reacts with borane·THF to form two different compounds (**A** and **B**) with the formula $C_{12}H_{21}B$. Neither **A** nor **B** contains any B–H bonds. On the FRONT PAGE of this quiz, fill in the structures of **A** and **B**, and indicate which one is likely to be formed in higher yield.



***** End of Quiz *****