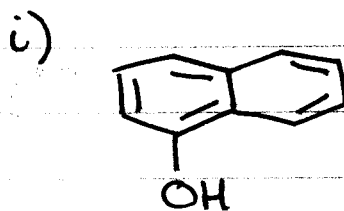
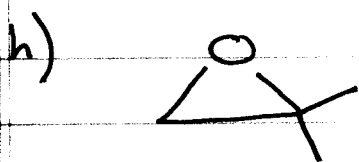
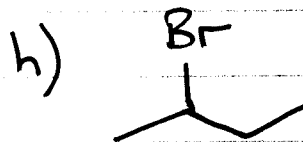
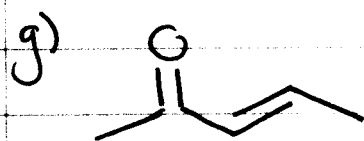
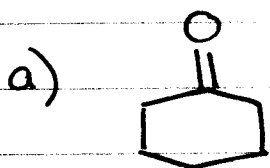


①

CHEM 30 A ORGANIC STRUCTURES 2

① For each of the structures below, calculate the molecular formula



2) For each structure below, calculate the molecular formula.

