

Last Name ANSWER	First Name KEY	MI
---------------------	-------------------	----

Student ID Number:

Total Score  230  / 200	Chem 30A Spring 2005  FINAL (180 Min)  Thurs June 16th	Course Grade  A +
-------------------------------------	---	-------------------------

\*\*\*DO NOT OPEN THIS EXAM UNTIL INSTRUCTED TO DO SO\*\*\*

ONLY ANSWERS WRITTEN IN THE BOXES PROVIDED WILL BE GRADED

INTERPRETATION OF THE QUESTIONS IS PART OF THE EXAM - DO NOT ASK FOR THE QUESTIONS TO BE EXPLAINED TO YOU


Q1	24 / 24	Q4	16 / 16	Q7	3φ / 30
Q2	30 / 30	Q5	32 / 32	Q8	2φ / 20
Q3	18 / 18	Q6	4φ / 40	Q9	2φ / 20
				Total	23φ / 200

"A professor is one who talks in someone else's sleep." - W H Auden

"I cannot teach anybody anything, I can only make them think." - Socrates

"I fully realize that I have not succeeded in answering all of your questions...Indeed, I feel I have not answered any of them completely. The answers I have found only serve to raise a whole new set of questions, which only lead to more problems, some of which we weren't even aware were problems. To sum it all up...In some ways I feel we are confused as ever, but I believe we are confused on a higher level, and about more important things." - Unknown

*In Memoriam*

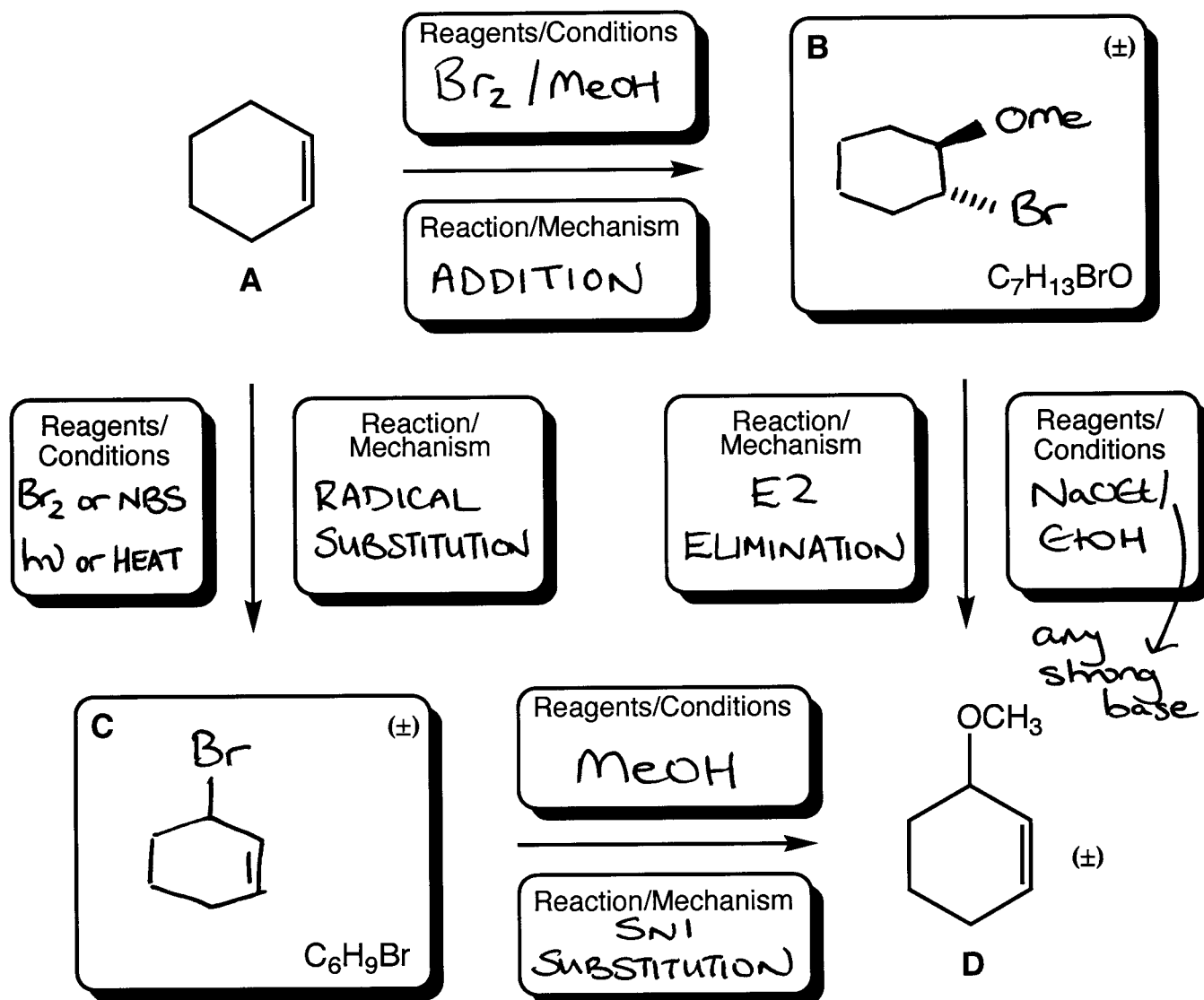


**Christopher Spencer Foote**

**Scholar, Teacher, Professor & Author**

**(6/5/1935 – 6/13/2005)**

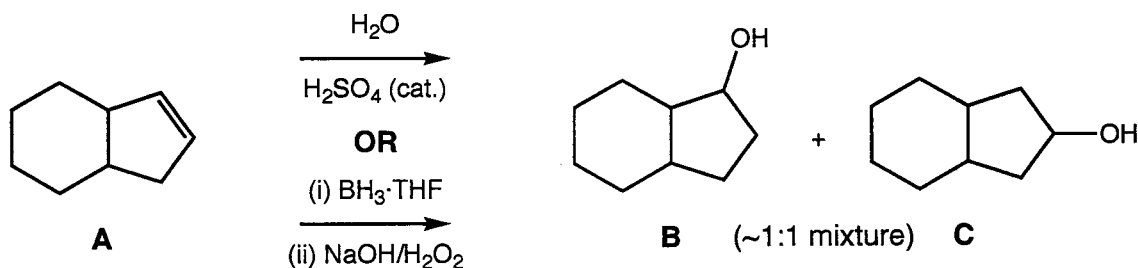
Q1. Cyclohexene **A** can be converted into 3-methoxycyclohexene **D** in a number of ways. One pathway involves the reaction of **A** to give intermediate **B**, which has the formula  $C_7H_{13}BrO$ , followed by a second reaction to give the desired product **D**. Alternatively, cyclohexene can be reacted to give intermediate **C**, which has the formula  $C_6H_9Br$ , followed by a second reaction to give the desired product **D**. Intermediates **B** and **C**, as well as the final product **D**, are formed as racemic mixtures. Suggest possible structures for **B** and **C** in the appropriate boxes below. For each reaction ( $A \rightarrow B$ ,  $B \rightarrow D$  and  $A \rightarrow C$ ,  $C \rightarrow D$ ), provide the necessary reagents/conditions in the appropriate box AND indicate what kind of reaction is happening – in the case of substitution and elimination reactions, indicate which mechanism is most likely operating (your choices are listed in the box at the bottom of this page). (24 points)



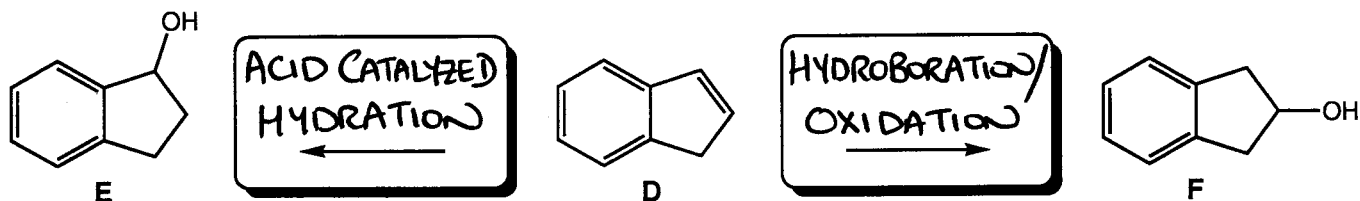
Reaction Types / Mechanisms to choose from –

Addition / Elimination (E1 or E2?) / Substitution (Radical,  $S_N1$ ,  $S_N2$ ?) / Rearrangement

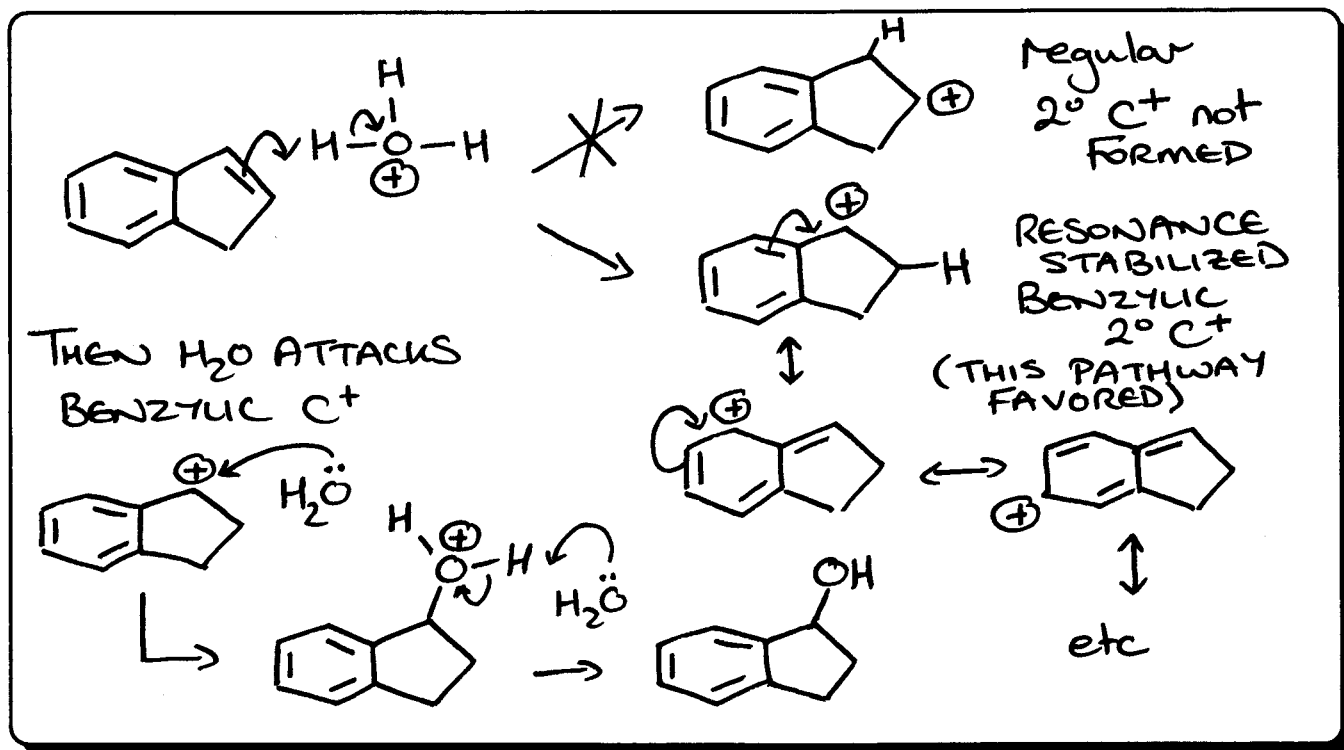
Q2. When alkene A is hydrated using EITHER acid catalyzed hydration ( $\text{H}_2\text{O}/\text{H}_2\text{SO}_4$  cat.) OR hydroboration/oxidation ( $\text{BH}_3\cdot\text{THF}$  followed by  $\text{NaOH}/\text{H}_2\text{O}_2$ ), an approximately 1:1 mixture of the secondary alcohols B and C is obtained, i.e., neither set of reagents gives any regioselectivity.



(a) In contrast, however, when alkene D is hydrated separately under these two sets of conditions, one reaction gives secondary alcohol E as the MAJOR product (>98%), whereas the other gives the secondary alcohol F as the MAJOR product (>98%). Indicate which set of conditions gives which product, by writing the words 'HYDROBORATION/OXIDATION' in one arrowed box, and 'ACID CATALYZED HYDRATION' in the other. (You may want to answer parts (b) and (c) first...) (4 points)

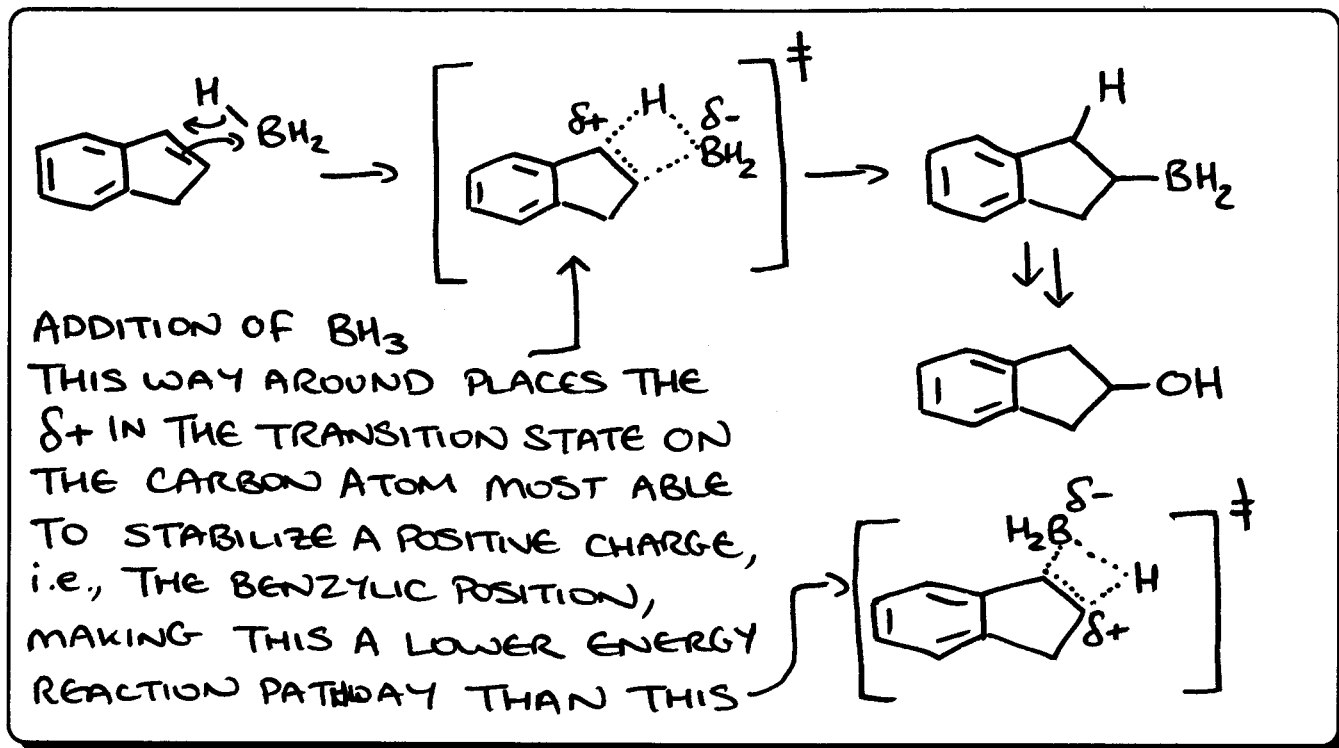


(b) In the box below, draw the mechanism for the acid catalyzed hydration ( $\text{H}_2\text{O}/\text{H}_2\text{SO}_4$  cat.) of alkene D and explain why the reaction is regioselective. (8 points)

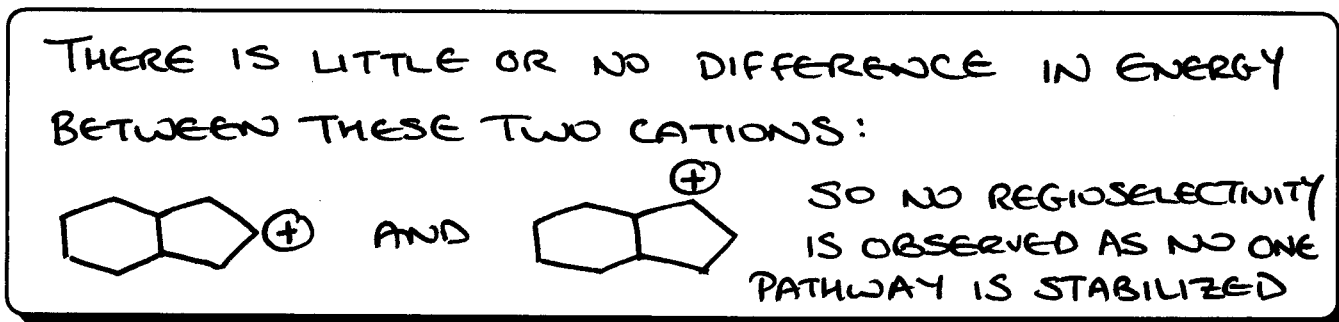


Question 2 is continued on the next page...

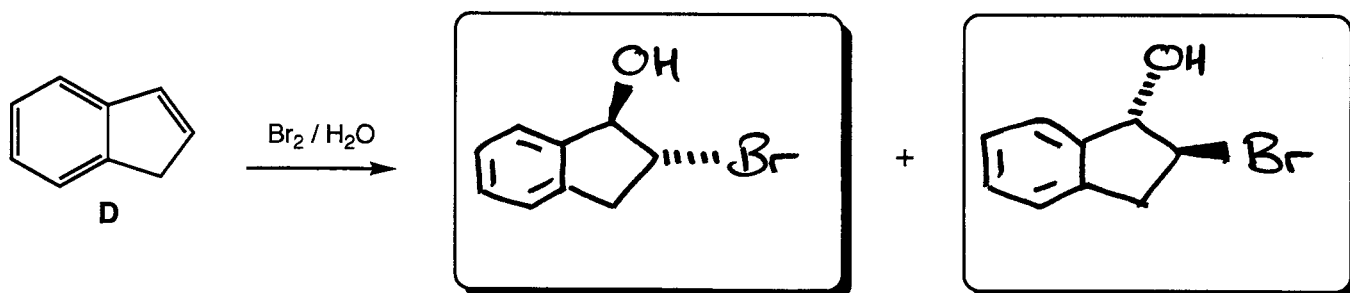
(c) In the box below, draw the mechanism for the VERY FIRST STEP of the hydroboration/oxidation reaction of alkene D (i.e., just show the mechanism for the first addition of alkene D to  $\text{BH}_3$ ). Draw the transition state for this step, and explain why the addition is regioselective. (8 points)



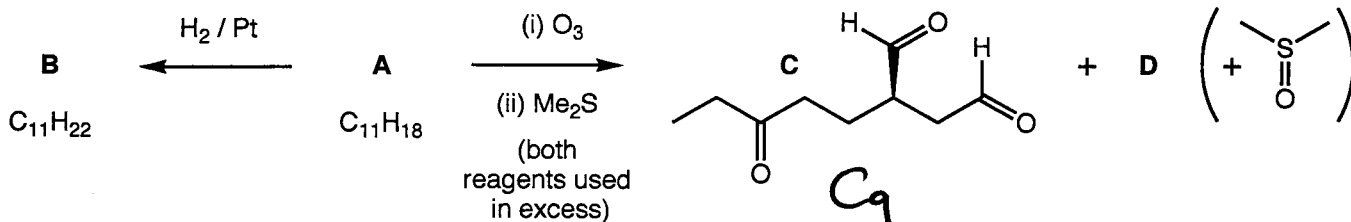
(d) Suggest a reason why no regioselectivity is observed in the hydration of alkene A, no matter what conditions are chosen. (4 points)



(e) The reaction of alkene D with  $\text{Br}_2$  in water gives a racemic mixture of two bromohydrins – draw the structures of these two bromohydrins below. (6 points)



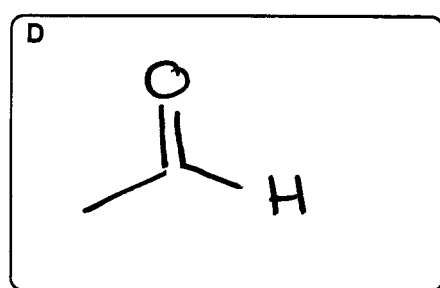
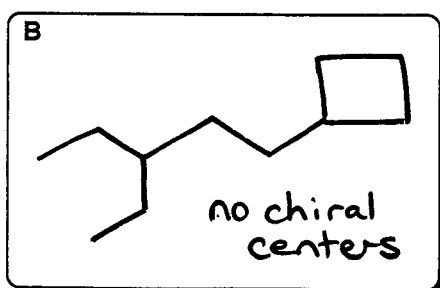
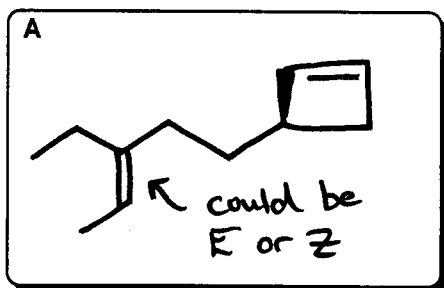
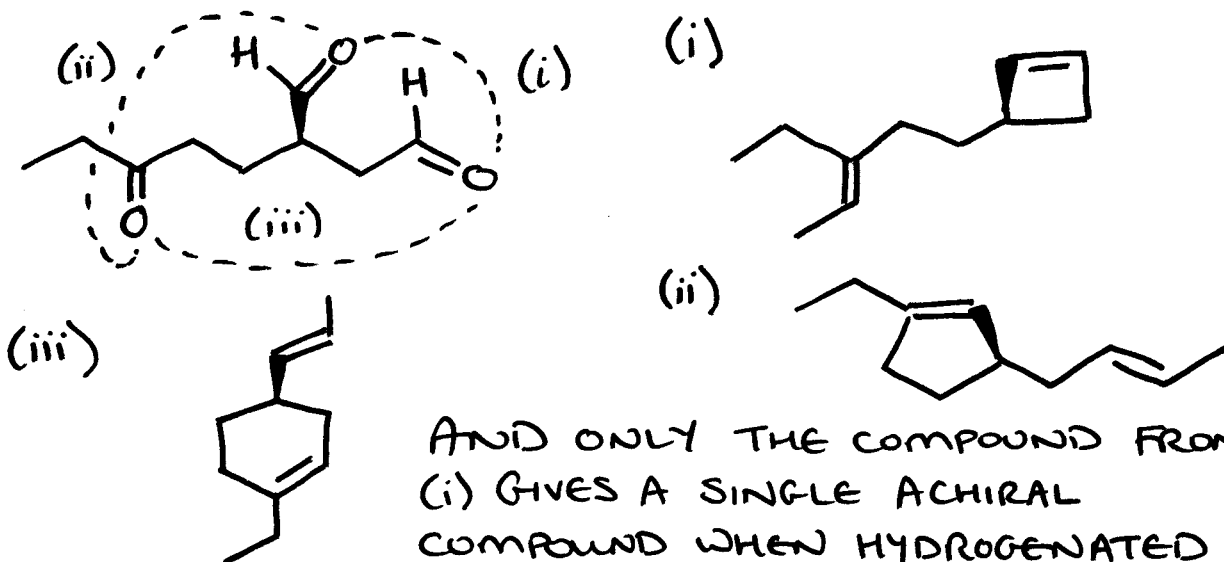
Q3. An optically active (chiral) compound A ( $C_{11}H_{18}$ ) reacts with hydrogen in the presence of a platinum (Pt) catalyst to give one SINGLE compound B, with the formula  $C_{11}H_{22}$ . Compound B is optically inactive (achiral). When A undergoes an ozonolysis reaction ( $O_3/Me_2S$ ), two new compounds are formed; the ketodialdehyde (C) shown below, and compound D (in addition to the byproduct  $Me_2S=O$ ). Draw the structures of compounds A, B, and D, in the boxes at the bottom of this page, including any relevant stereochemistry. (7 points each A and B, 4 points for D)



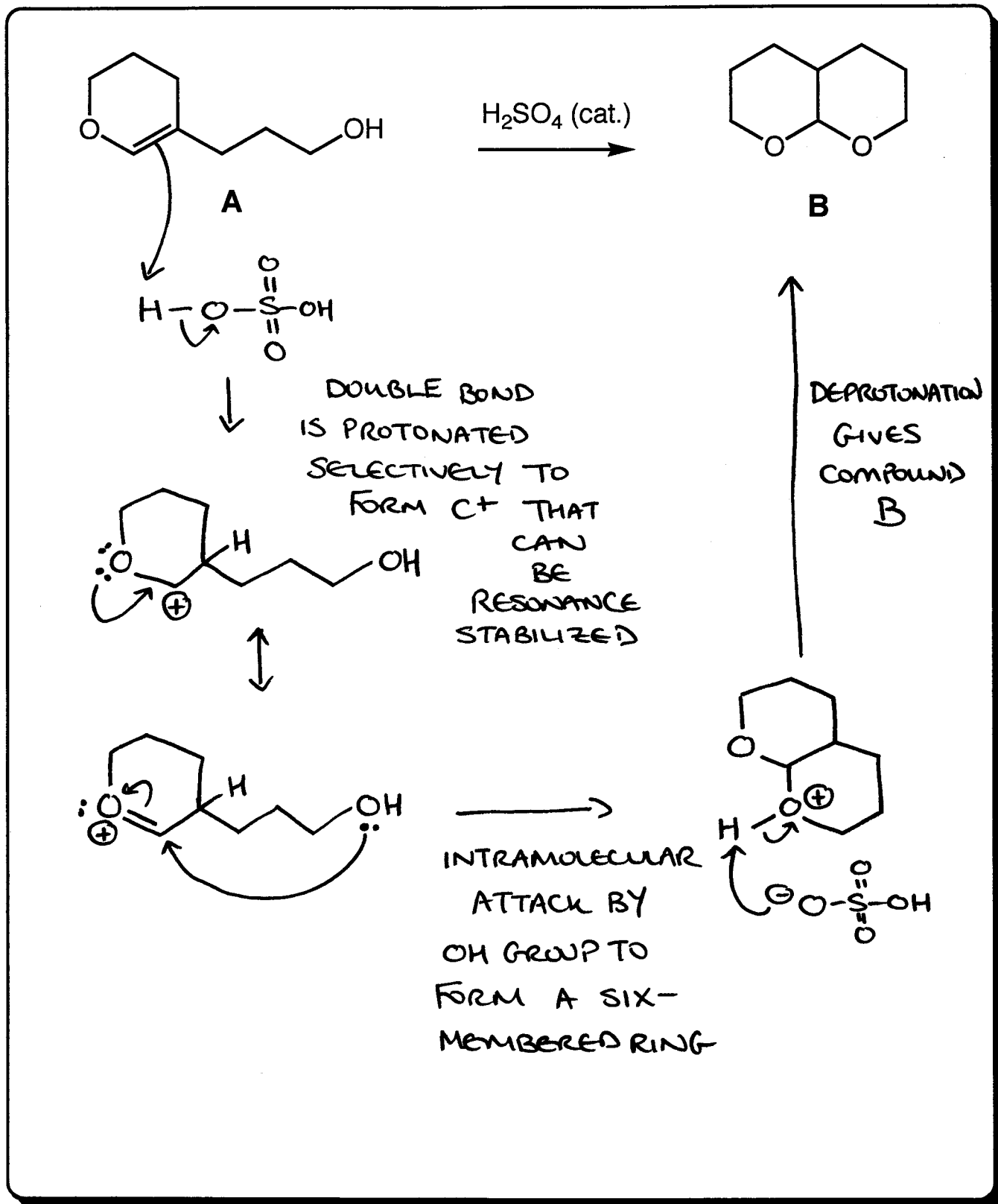
Space for working...

SINCE A IS BROKEN APART BY OZONOLYSIS INTO A C9 and a C2 FRAGMENT, D MUST BE

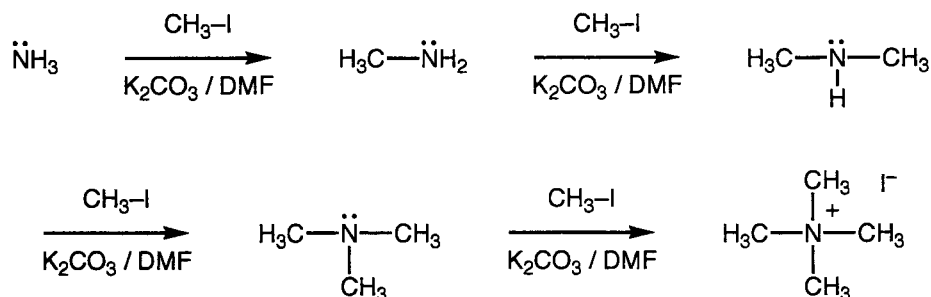
THE OTHER TWO C=O GROUPS IN C MUST HAVE FORMED A RING, SO WHICH ONE IS IT?



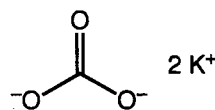
Q4. Propose a reasonable mechanism that accounts for the transformation of compound A into compound B shown below - (show all intermediates, all appropriate lone pairs, formal charges, significant resonance forms, and curly arrows). Explain each step with a few words. (16 points)



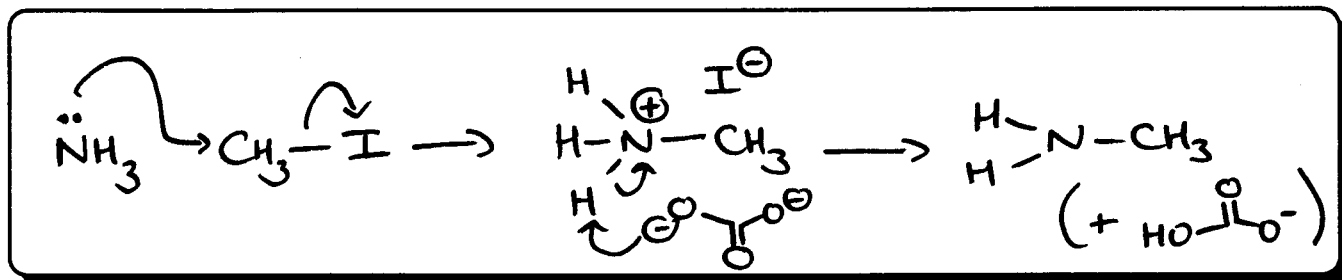
Q5. Ammonia ( $\text{NH}_3$ ) undergoes an  $\text{S}_{\text{N}}2$  reaction with methyl iodide ( $\text{CH}_3\text{-I}$ ) in the presence of a base such as potassium carbonate ( $\text{K}_2\text{CO}_3$ ) to give methylamine ( $\text{CH}_3\text{-NH}_2$ ). Methylamine is still a good nucleophile, and will react with another equivalent of  $\text{CH}_3\text{-I}$  under the same conditions to give dimethylamine. In turn, dimethylamine will continue to react to form trimethylamine, and finally trimethylamine will react to form tetramethylammonium iodide.



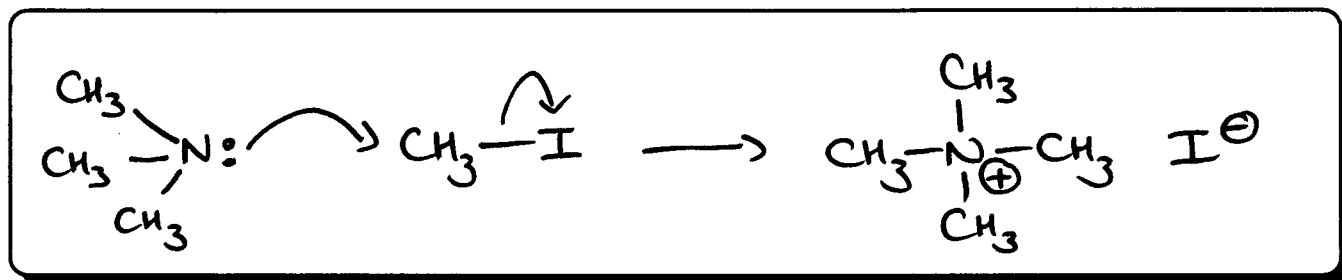
Structure of  $\text{K}_2\text{CO}_3$   
(Potassium carbonate)



(a) In the box below draw the mechanism showing how  $\text{NH}_3$  reacts with  $\text{CH}_3\text{-I}$  in the presence of a carbonate base to give methylamine ( $\text{CH}_3\text{-NH}_2$ ), i.e., the FIRST step of the sequence shown above – (show all intermediates, all appropriate lone pairs, formal charges, and curly arrows). (6 points)



(b) In the box below draw the mechanism showing how trimethylamine ( $(\text{CH}_3)_3\text{N}$ ) reacts with  $\text{CH}_3\text{-I}$  to give tetramethylammonium iodide ( $(\text{CH}_3)_4\text{N}^+\text{I}^-$ ), i.e., the LAST step of the sequence shown above – (show all intermediates, all appropriate lone pairs, formal charges, and curly arrows). (3 points)



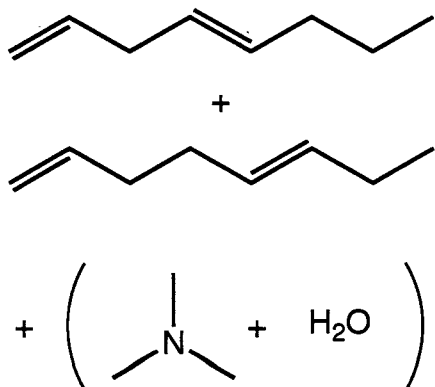
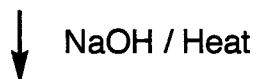
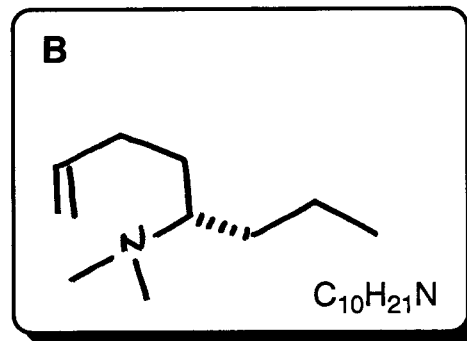
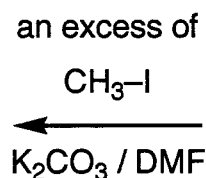
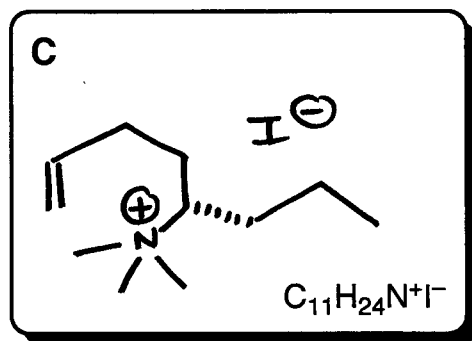
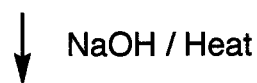
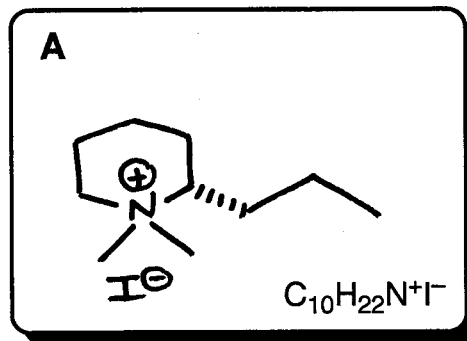
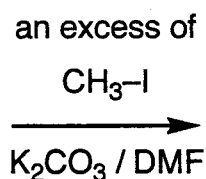
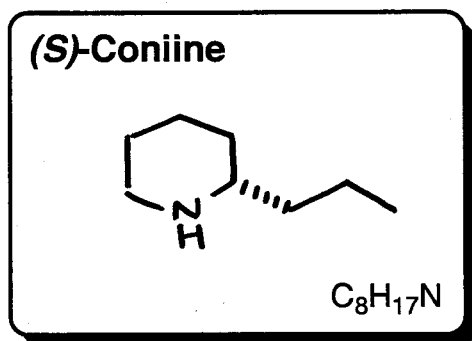
(c) Briefly comment upon the role of the carbonate base in the reaction – and suggest why it does not participate in the final step? (3 points)

CARBONATE BASE WILL REMOVE ANY ACIDIC PROTONS FROM THE NITROGEN ATOM, ALLOWING IT TO ACT FURTHER AS A NUCLEOPHILE. IN THE LAST STEP, THERE IS NO ACIDIC H ON N FOR THE CARBONATE TO ATTACK

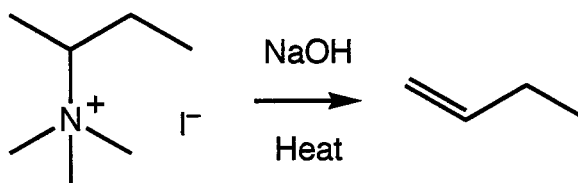
Question 5 is continued on the next page...



(d) (*S*)-Coniine is a toxic alkaloid found in the hemlock plant, and is most infamously associated with the death of Socrates – he was sentenced to death in 399 BC and made to drink a cup of hemlock juice. (You can ignore this bit of trivia inside these parentheses if you wish... In man, 3 mg of coniine is said to have produced symptoms, but 15 mg have been tolerated without discomfort. Perhaps 30-60 mg is dangerous and death may occur with doses greater than 100 mg. It has been reported that a lethal dose may be 6 to 8 fresh leaves.) When (*S*)-coniine ( $C_8H_{17}N$ ) is treated with an excess of  $CH_3-I$ , a compound A, with the formula  $C_{10}H_{22}N^+I^-$ , is formed. When A is heated with NaOH, a Hofmann elimination occurs, giving A SINGLE COMPOUND (B), which has the formula  $C_{10}H_{21}N$ . When reacted with an excess of  $CH_3-I$ , B can be turned into compound C, with the formula  $C_{11}H_{24}N^+I^-$ . Finally, when C is heated with NaOH, a 1:1 mixture of 1,4-octadiene and 1,5-octadiene is produced, as well as the byproducts water and trimethylamine. Suggest structures for compounds A, B, and C, as well as for (*S*)-coniine – HINT: coniine contains only ONE stereocenter. (5 points each structure)

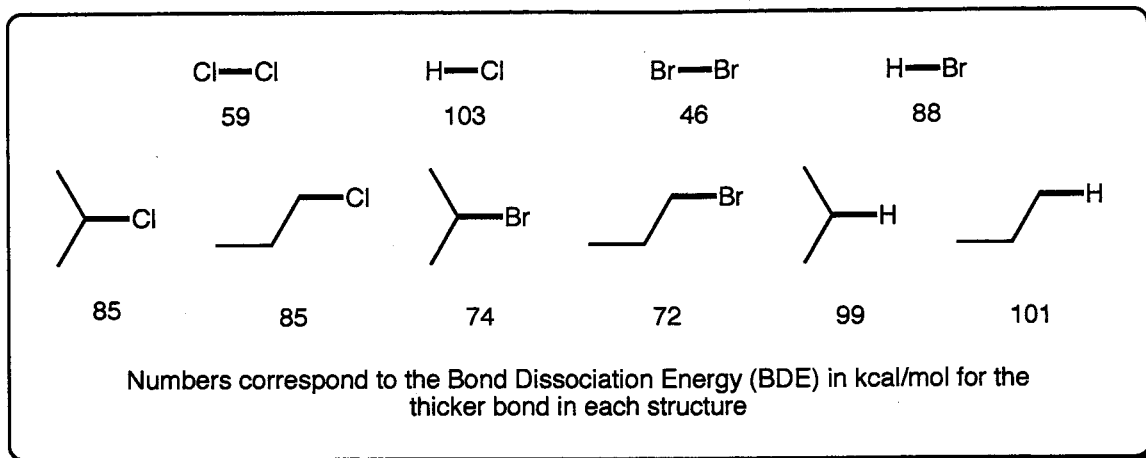


**Reminder –**

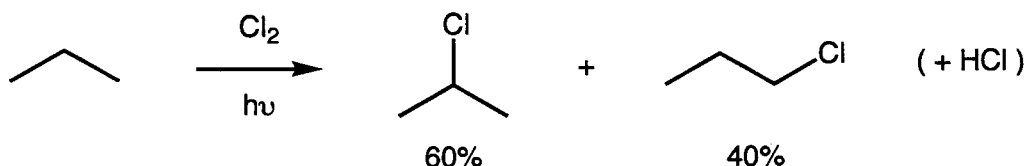


*This is the Hofmann elimination, it gives the less substituted alkene as the major product*


Q6. You may find the following bond dissociation values useful for answering this question –




(a) The radical chlorination of propane (shown below) gives a mixture of 2-chloro- and 1-chloropropane. **IMPORTANT:** The following questions about the mechanism of this reaction concern the MAJOR product (i.e., 2-chloropropane) of the reaction.



This reaction begins with a CHAIN INITIATION STEP that creates radical species – in the box below, write down the mechanism for this first step of the reaction. (2 points)



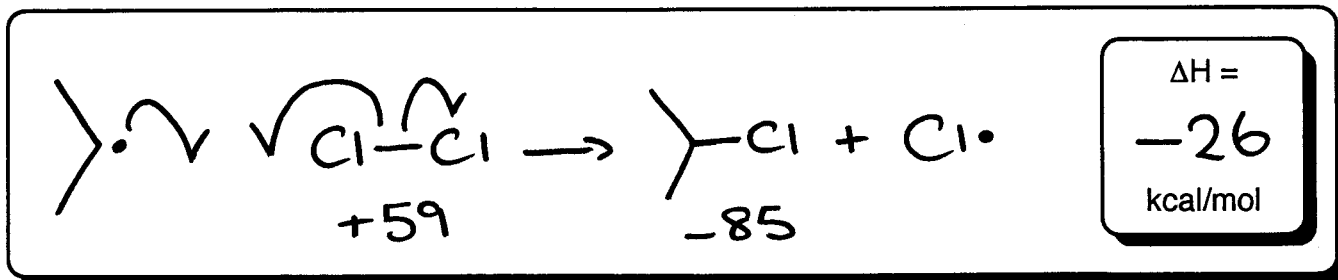
(b) After initiation, there are two CHAIN PROPAGATION steps that can happen many times over before a termination reaction occurs. The first chain propagation step is one in which a halogen radical abstracts an H atom from the alkane – this is the rate determining step (RDS) for the whole reaction. Write down the mechanism for this first PROPAGATION step, and using the values given at the top of this page, calculate the  $\Delta H$  value for this process. (4 points mechanism, 2 points  $\Delta H$ )



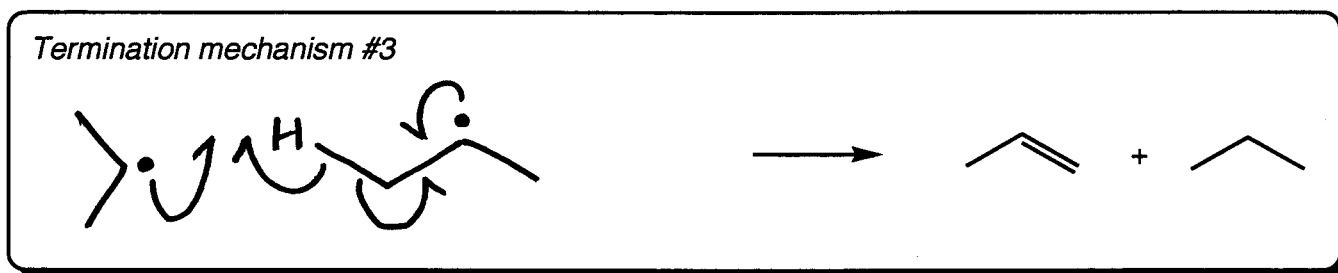
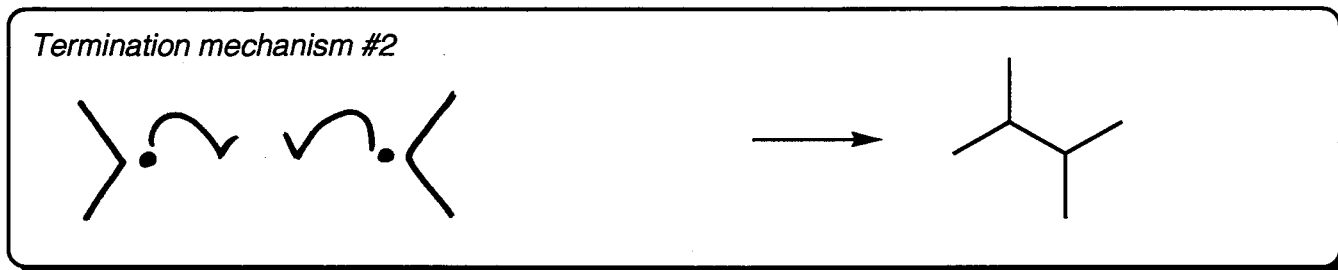
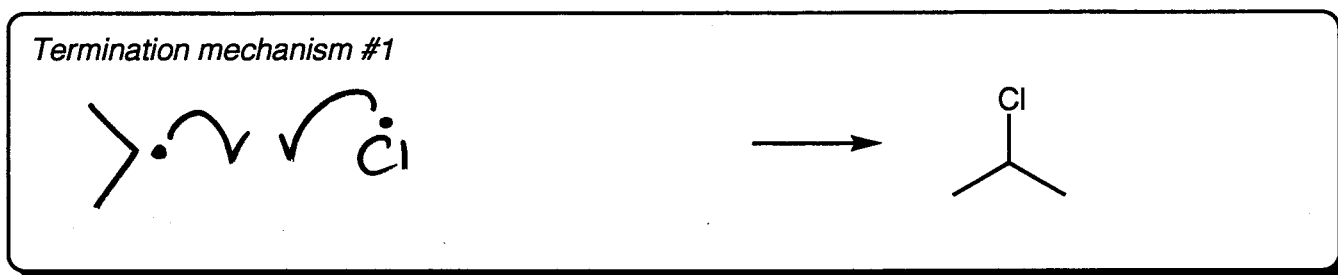
$$\Delta H = -4 \text{ kcal/mol}$$

Question 6 is continued on the next page...

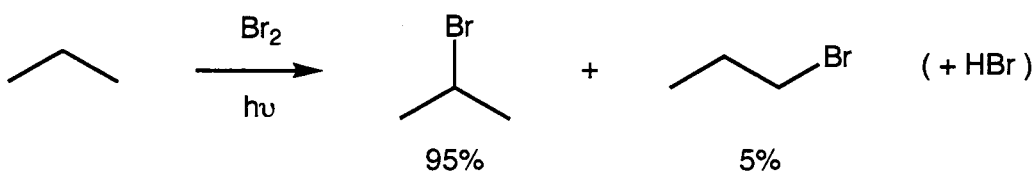
(c) The second CHAIN PROPAGATION step produces a molecule of the product, and regenerates a halogen radical. Write down the mechanism for this second PROPAGATION step, and using the values given at the top of this page, calculate the  $\Delta H$  value for this process. (4 points mechanism, 2 points  $\Delta H$ )



(d) The CHAIN REACTION continues until a CHAIN TERMINATION reaction occurs, in which radicals are consumed. Show the mechanisms for the TERMINATION reactions that lead to the three sets of products below. (2 points each)

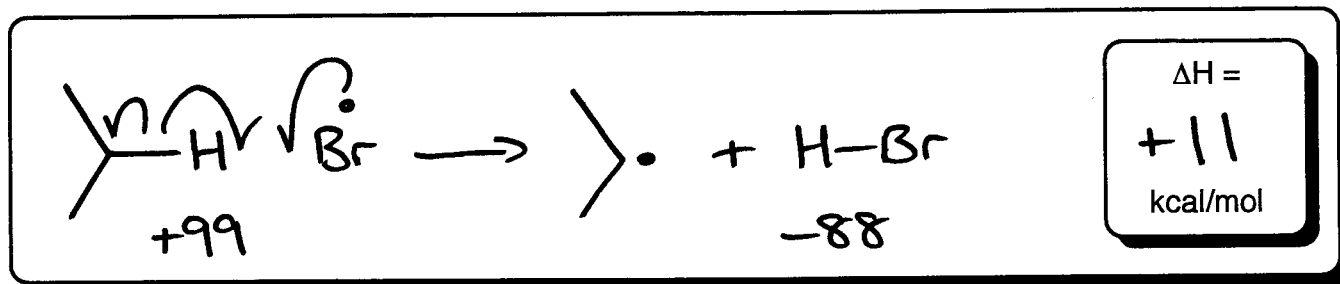


(e) The radical bromination of propane (shown below) gives a mixture of 2-bromo- and 1-bromopropane. In this case, the regioselectivity is much more pronounced than in the case of chlorination, as 2-bromopropane is produced in over 95% yield.

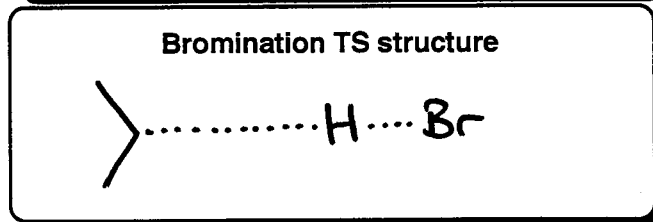

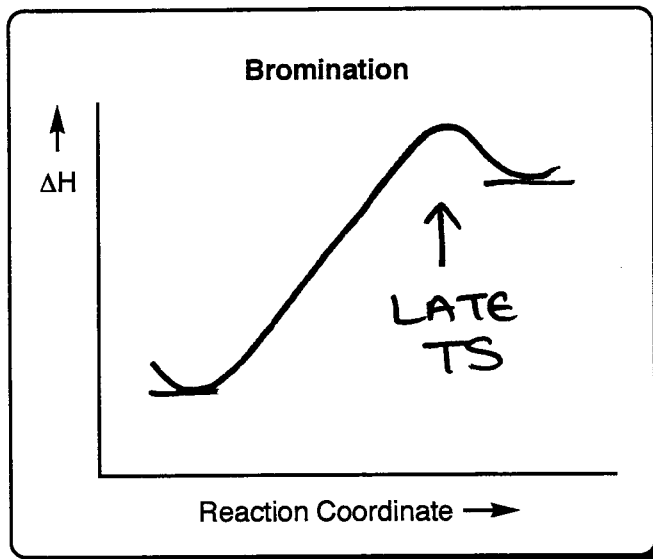
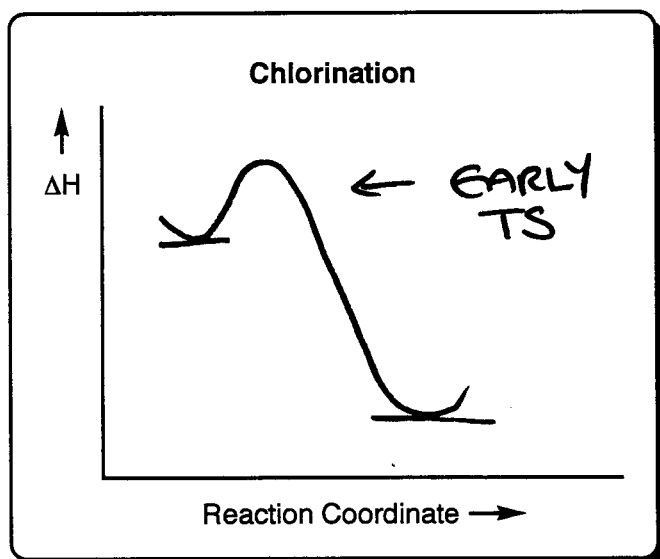


Question 6 is continued on the next page...

**IMPORTANT:** The following questions about the mechanism of this reaction concern the MAJOR product (i.e., 2-bromopropane) of the reaction. Just as you did in part (b) of this question for the analogous chlorination reaction, write down the mechanism for the first PROPAGATION step of this bromination reaction (the rate determining step), and using the values given at the beginning of this question, calculate the  $\Delta H$  value for this process. (4 points mechanism, 2 points  $\Delta H$ )



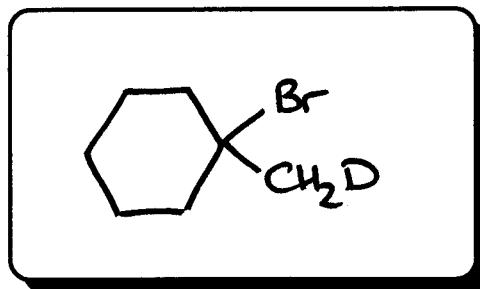
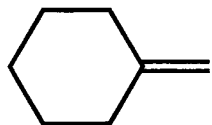
(f) If you calculated everything correctly, you should notice that the  $\Delta H$  change for the RDS of the bromination reaction is a POSITIVE number, whereas for the chlorination reaction it is a NEGATIVE number, i.e., it is an endothermic process for bromination, but an exothermic process for chlorination. Using your knowledge of the HAMMOND postulate, draw energy profiles for the rate determining steps of the chlorination and bromination reactions (Note: don't draw profiles for the whole reaction, just for the RDS in each case). In each case, label the transition state as either EARLY or LATE, and draw what you think the actual TS structure looks like in the box below. Finally, in the last box on this page, use your previous answers to explain why the regioselectivity is more significant for bromination. (14 points)



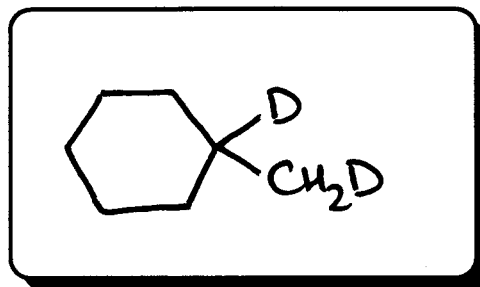
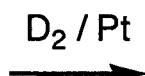
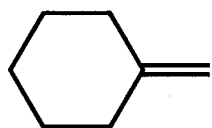
**Regioselectivity?** THE STABILITY OF THE RADICAL IS MUCH MORE REFLECTED IN THE BROMINATION TS THAN IN THE CASE OF CHLORINATION, SO GREATER STABILITY OF 2° VS 1° RADICALS IS REFLECTED IN PRODUCT DISTRIBUTION FOR Br<sub>2</sub>

**Q7.** For each of the reactions shown below draw the MAJOR PRODUCT (paying particular attention to any appropriate stereochemical relationships) in the boxes provided. Note: for two-step reactions, just give the final product, DO NOT draw intermediates. (3 points each)

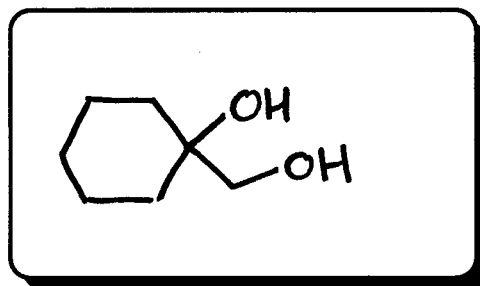
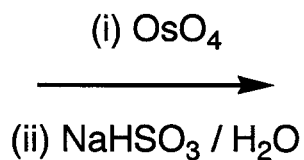
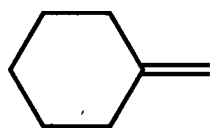
(a)



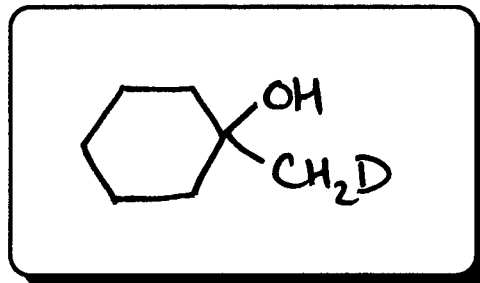
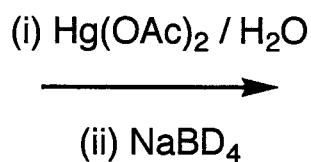
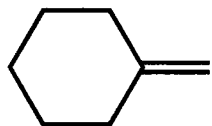
(b)



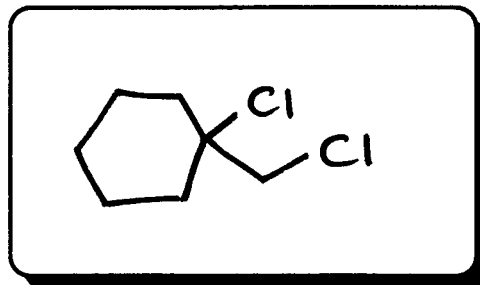
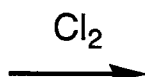
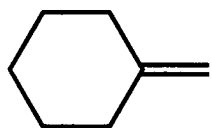
(c)



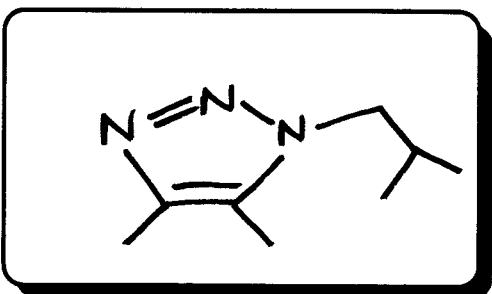
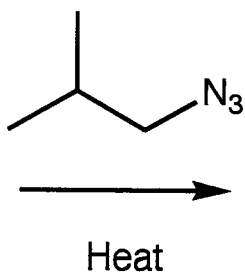
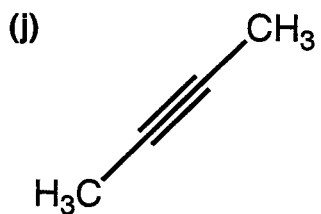
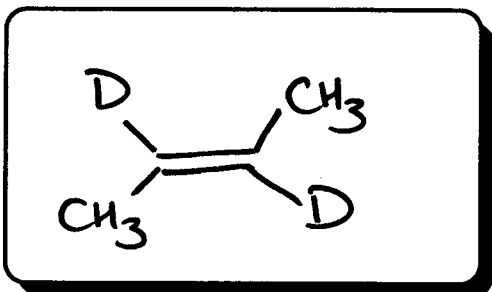
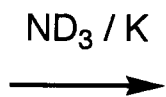
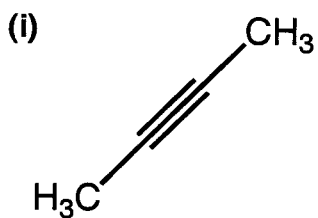
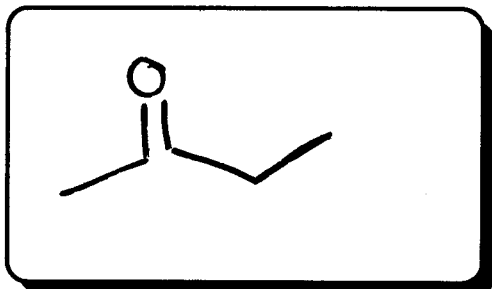
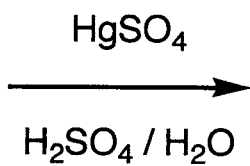
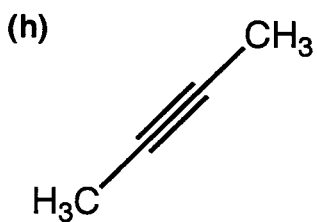
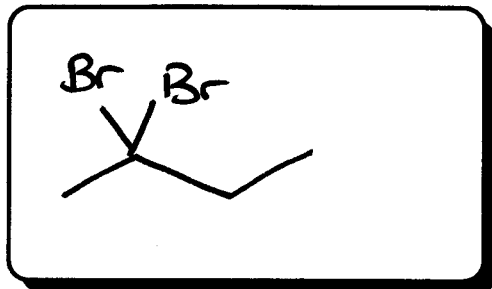

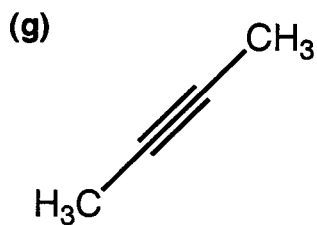
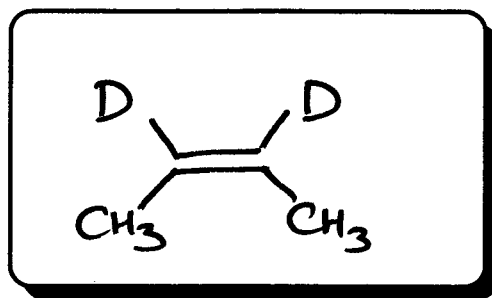
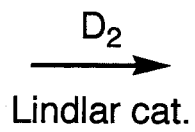
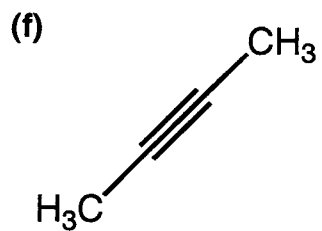
(d)



(e)

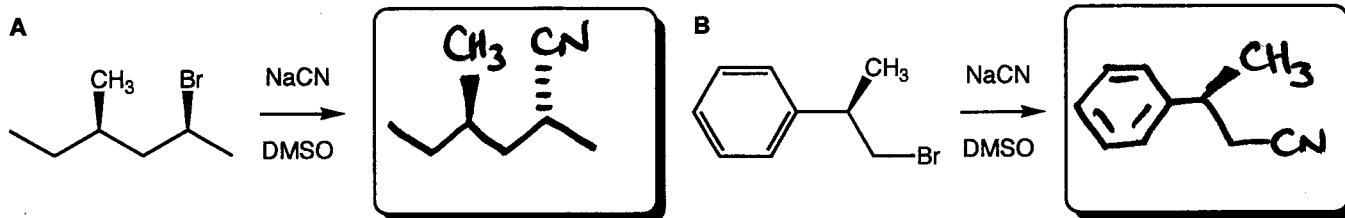


Question 7 is continued on the next page...

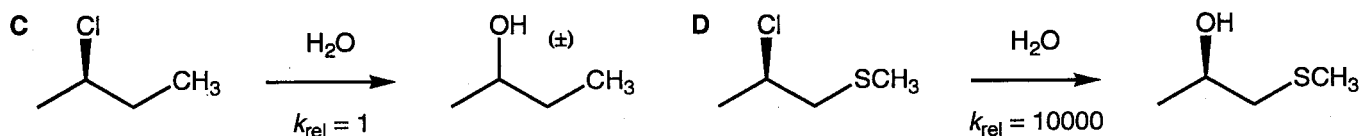


Q8. Answer the following questions about nucleophilic substitution reactions –

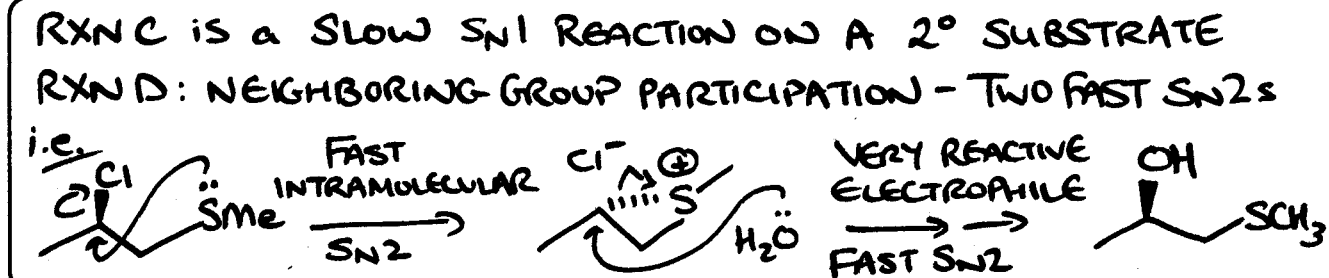
(a) Predict the products of the following  $S_N2$  reactions – (3 points each)



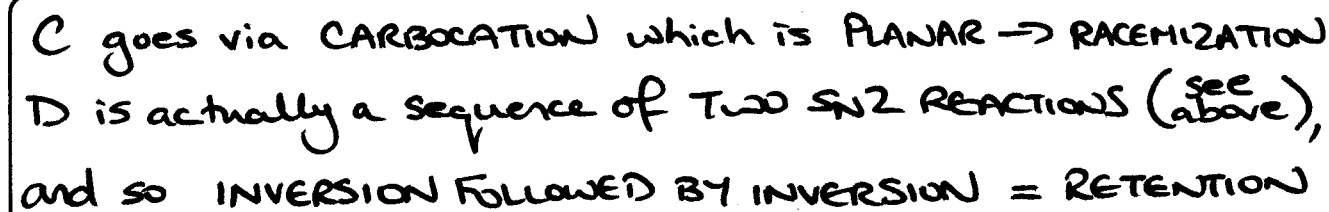
Consider the two reactions shown below, and then answer the following questions:



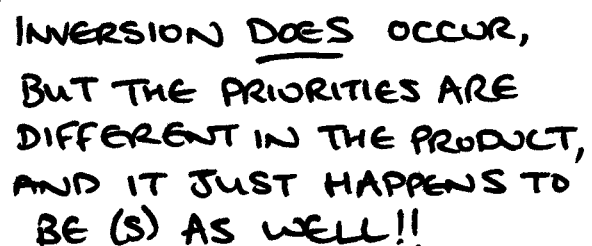
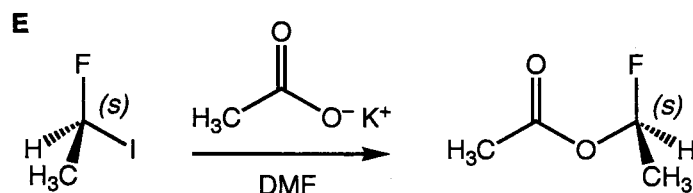
(b) Why is reaction D so much faster than reaction C? (4 points)



(c) Reaction D appears to proceed with retention (rather than inversion) of configuration – explain what is actually happening, and why does reaction C give a mixture of stereoisomers? (6 points)



(d) Reaction E (below) also appears to proceed with retention (rather than inversion) of configuration – explain what is actually happening... (4 points)



Q9. If heated with a catalytic amount of sulfuric acid, the cyclobutane derivative A rearranges into the cyclopentene derivative C. Propose a reasonable mechanism for this transformation and briefly explain each step with a few words – (show all intermediates, all appropriate lone pairs, formal charges, and curly arrows). HINT: An intermediate (B), with the same molecular formula as both A and C, is formed en route from A to C. Your mechanism may NOT involve ANY 1,2-hydride shifts. (20 points)

