

Name (First, MI, Last):

Student ID Number:

Chem 30B Fall 2003

FINAL EXAM (180 Min)

Monday December 8th

Q1	/ 30	Q6	/ 18	Q11	/ 18
Q2	/ 18	Q7	/ 18	Q12	/ 15
Q3	/ 16	Q8	/ 15	Q13	/ 15
Q4	/ 20	Q9	/ 12	Total	/ 200
Q5	/ 15	Q10	/ 20	Final Course Grade	

*****DO NOT OPEN THIS EXAM UNTIL INSTRUCTED TO DO SO*****

ONLY ANSWERS WRITTEN IN THE BOXES PROVIDED WILL BE GRADED

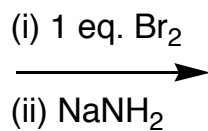
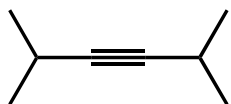
**INTERPRETATION OF THE QUESTIONS IS PART OF THE EXAM –
DO NOT ASK FOR THE QUESTIONS TO BE EXPLAINED TO YOU**

"Every day you may make progress. Every step may be fruitful. Yet there will stretch out before you an ever-lengthening, ever-ascending, ever-improving path. You know you will never get to the end of the journey. But this, so far from discouraging, only adds to the joy and glory of the climb"

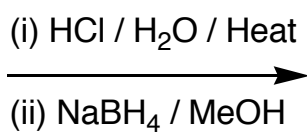
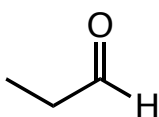
- Sir Winston Churchill

Question 1 Each of these reactions produces ONE MAJOR PRODUCT. In each case, draw this product in the box provided. For multi-step reactions just give the FINAL product, *i.e.*, no intermediates. (2 points each)

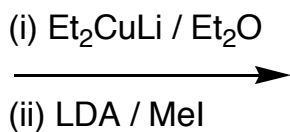
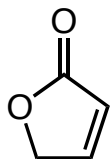
(a)



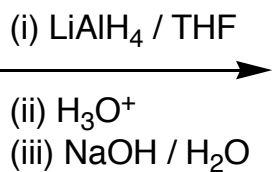
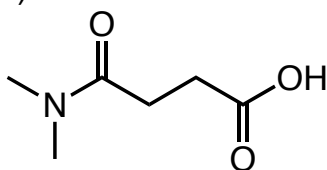
(b)




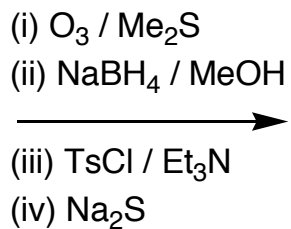
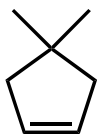
(c)



(d)

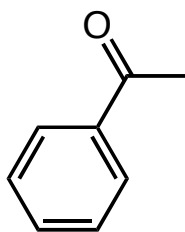


(e)



Question 1 continued on next page...

(f)



(i) xs Br₂ / NaOH

(ii) H₃O⁺

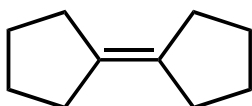
(iii) SOCl₂

(iv) Me₂CuLi

Et₂O / -78 °C



(g)

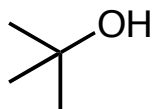


(i) OsO₄ / H₂O₂

(ii) H₂SO₄ cat.



(h)



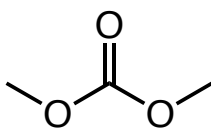
(i) H₂SO₄

(ii) BH₃ / THF

(iii) NaOH / H₂O₂



(i)

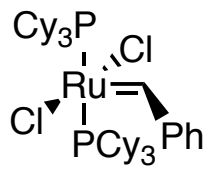
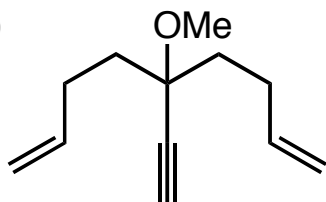


(i) xs EtMgBr

(ii) H₃O⁺



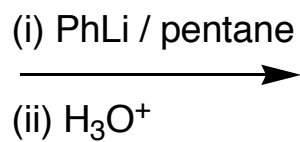
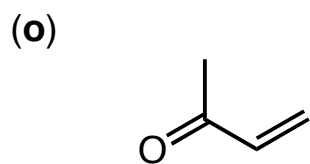
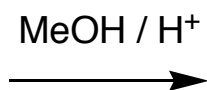
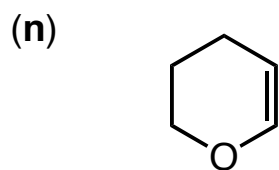
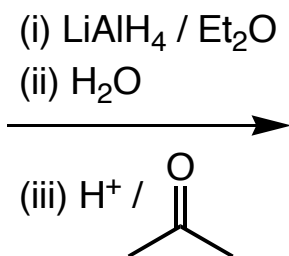
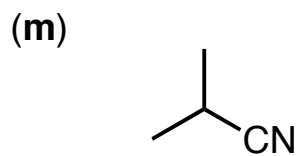
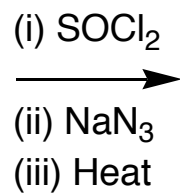
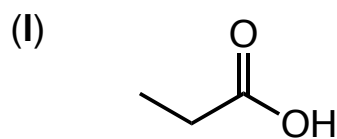
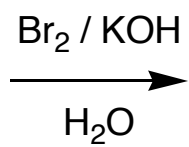
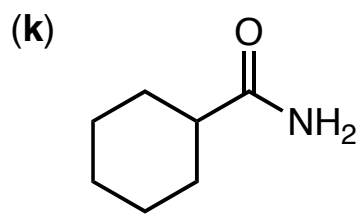
(j)



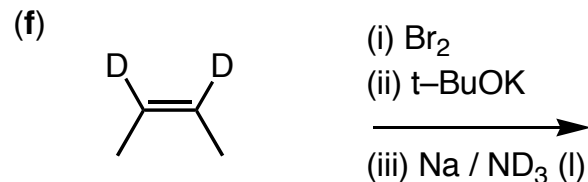

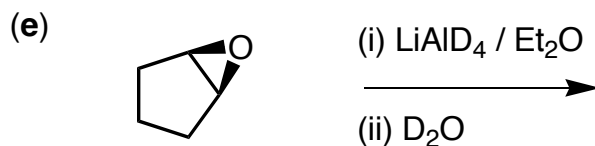
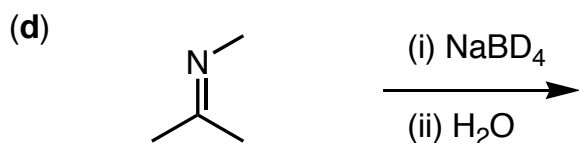
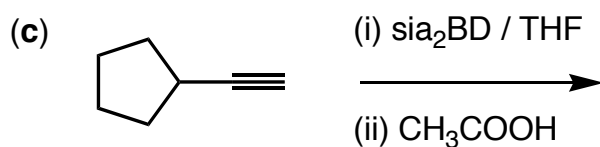
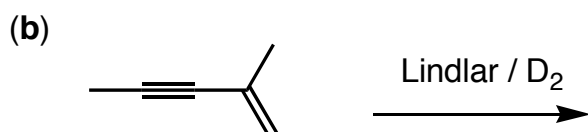

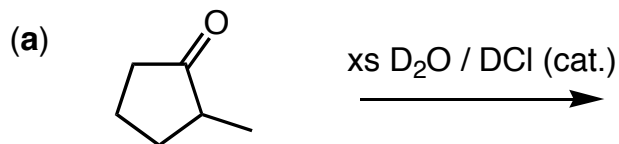
CH₂Cl₂



Question 1 continued on next page...

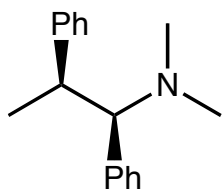


Question 2 Deuterium (D) is a heavier isotope of hydrogen (H). Chemical reagents in which certain H atoms have been replaced by D are used to perform reactions in which the products are isotopically labeled. For each of the reactions below, draw the structure of the final product, CAREFULLY INDICATING the position of the D atoms in the products. (3 points each)

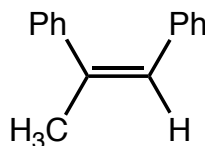
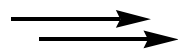


Question 3 Propose a synthesis for each of the transformations shown below, include all intermediates, in addition to conditions and reagents for each synthetic step – do not worry about solvents. (8 points each)

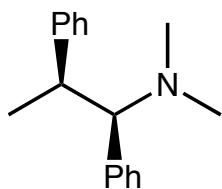
(a)



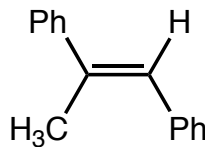

As many steps
as you need



(b)

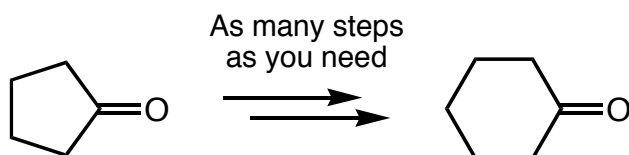


As many steps
as you need

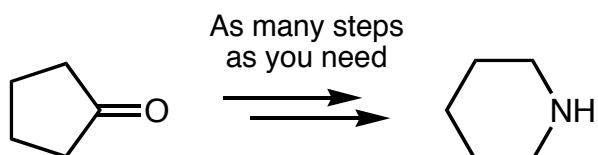


Question 4 Propose a synthesis for each of the transformations shown below, include all intermediates, in addition to conditions and reagents for each synthetic step – do not worry about solvents. (10 points each)

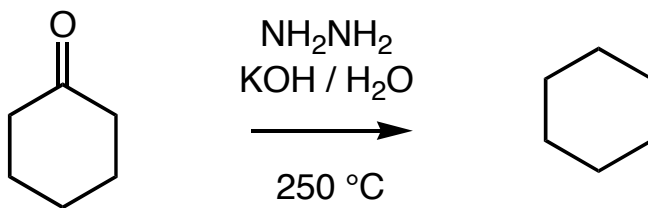
(a)



(b)

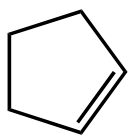


Question 5 Propose a reasonable mechanism that accounts for the transformation shown in the box below – SHOW ALL STEPS. (15 points)

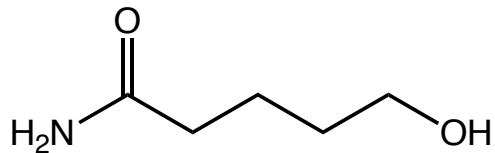



What is the name of this reaction? _____

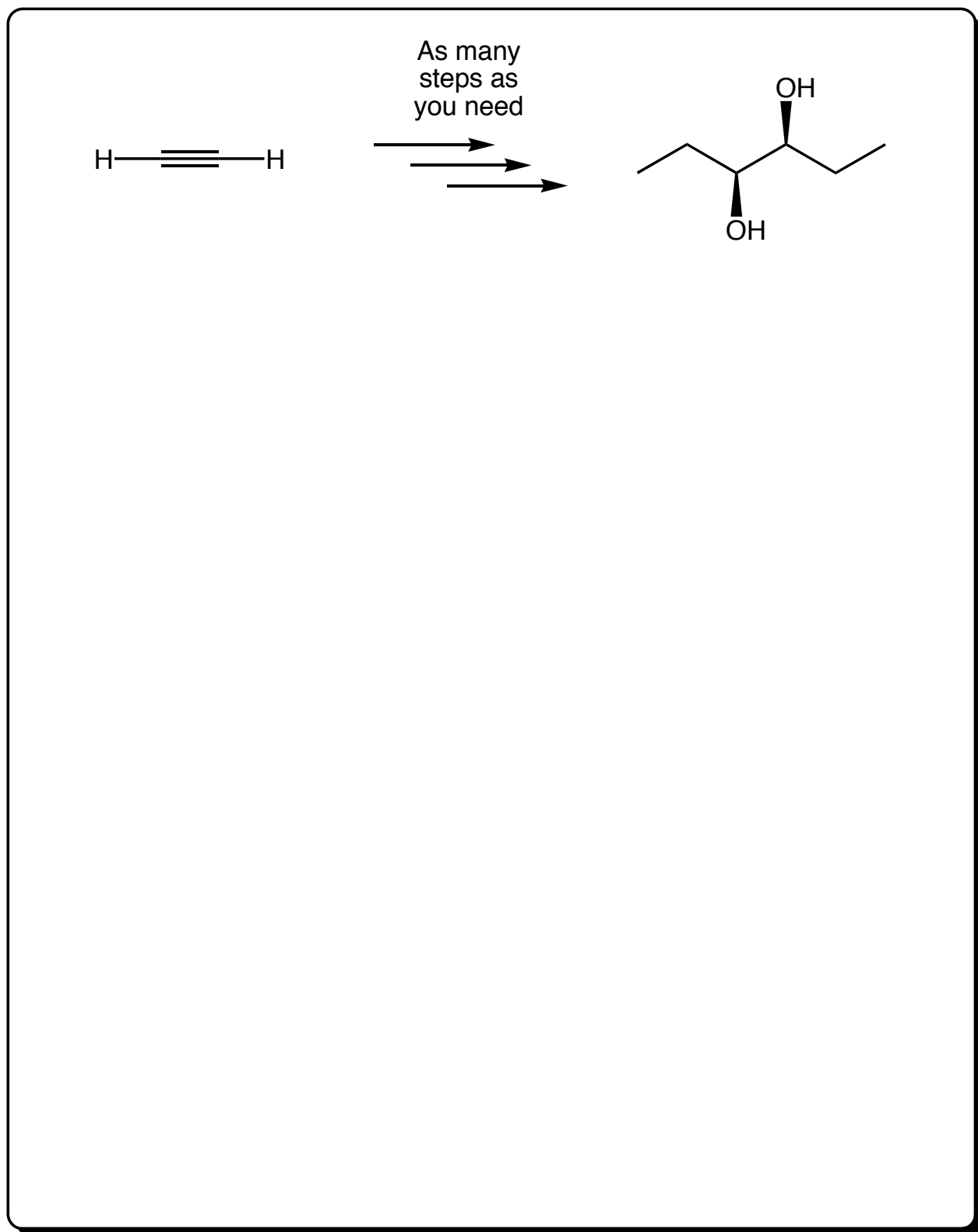
Question 6 Propose a synthesis to convert cyclopentene into the acyclic hydroxy-amide compound shown below. Show all intermediates, and the reagents necessary for each step (do not concern yourself with solvents). Points will be deducted for syntheses that result in a mixture of compounds. (18 points)



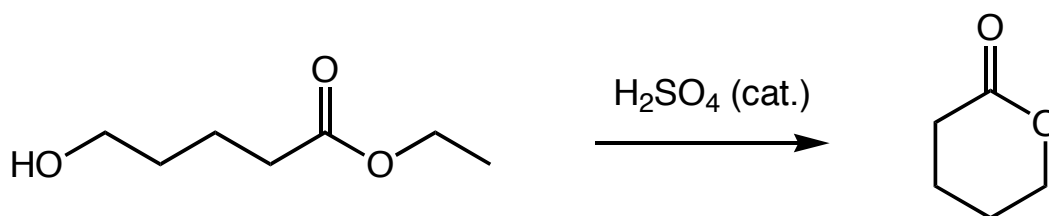
As many steps
as you need



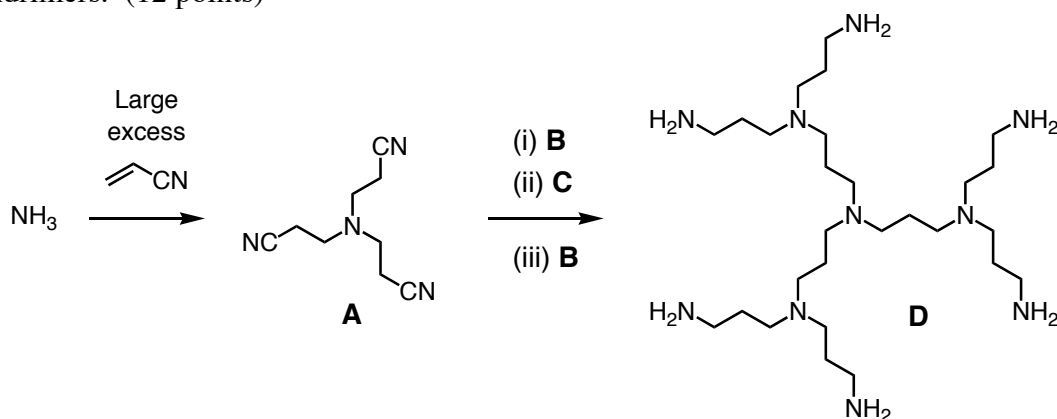
Question 7 Using ONLY acetylene (C_2H_2) as your carbon source, and other NON-CARBON containing reagents, propose a synthesis for *syn*-3,4-hexandiol in the box below. Show all intermediates and reagents for each transformation (do not concern yourself with solvents). Points will be deducted if your synthesis results in *anti*-3,4-hexandiol!! (18 points)



Question 8 Propose a reasonable mechanism that accounts for the transformation shown in the box below – SHOW ALL STEPS. (15 points)



Question 9 Answer the following questions about a novel class of highly branched compounds called dendrimers. (12 points)



(a) Explain why the product of the reaction of an excess of acrylonitrile with ammonia gives the trinitrile compound **A** (Show Intermediates)

4 points

(b) A three step reaction sequence [(i) **B**, (ii) **C**, (iii) **B**, *i.e.*, steps (i) and (iii) are the same] gives the branched polyamine compound **D** (a 1st generation dendrimer). What are the reagents **B** and **C**?

B =

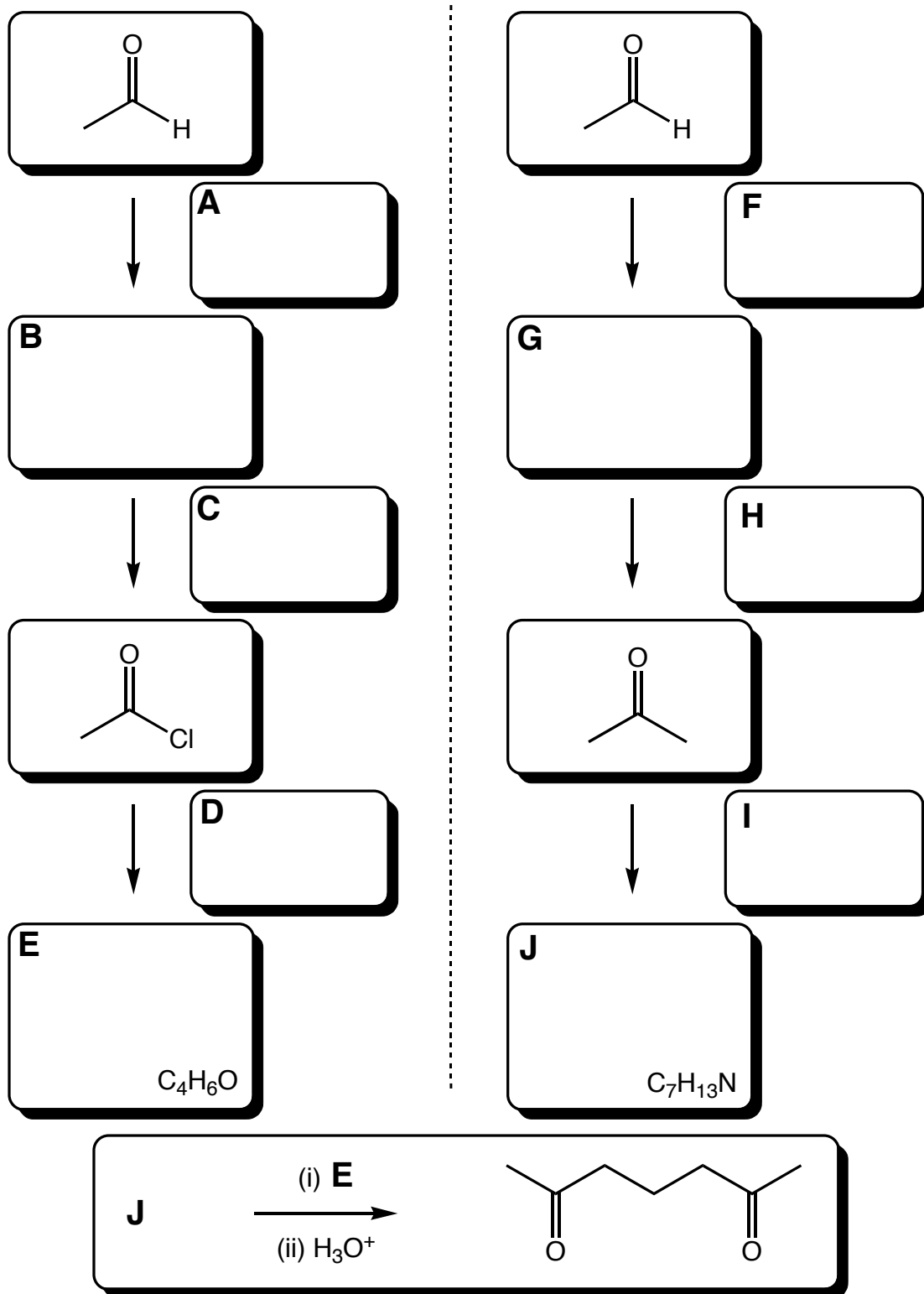
C =

4 points

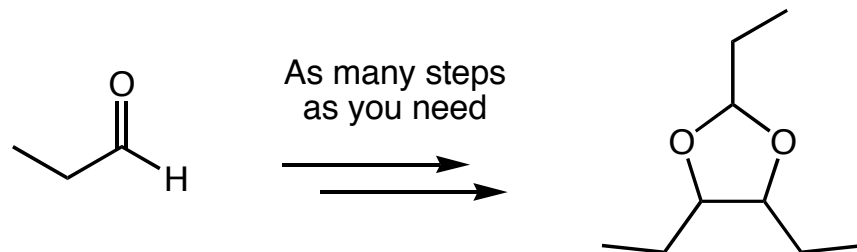
(c) Subjecting compound **D** to a two step reaction [(i) **C**, then (ii) **B**] gives a 2nd generation dendrimer – what is its structure?

4 points

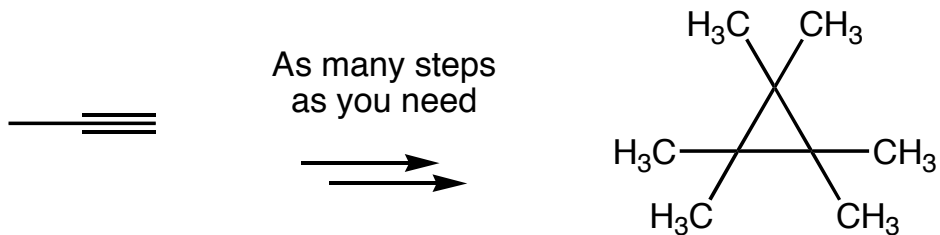
Question 10 Shown below are two short synthetic schemes, the one on the left results in the formation of compound **E** (molecular formula C_4H_6O), and the one on the right results in the formation of compound **J** (molecular formula $C_7H_{13}N$). When **E** and **J** are reacted together (box at bottom of page), 2,6-heptadione is formed. In the large boxes (**B**, **E**, **G**, **J**), fill in the structures of plausible intermediate compounds, and in the small boxes (**A**, **C**, **D**, **F**, **H**, **I**) fill in the reagents necessary to achieve each transformation. (20 points)



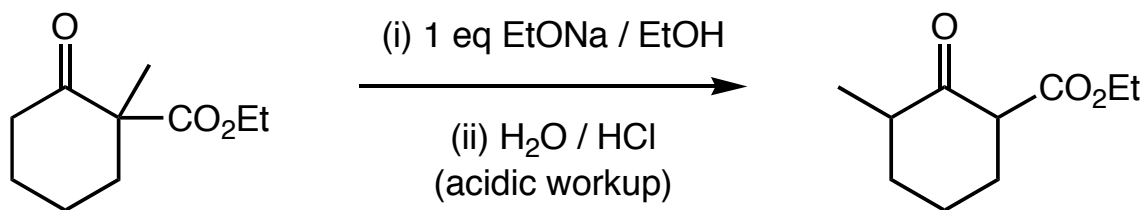
Question 11 Propose a synthesis of the cyclic five-membered target molecule shown below using propanal as your only starting material. You may use any reagents of your choosing, but all of the carbon atoms in the final product **MUST** come from propanal. Show all intermediates and reagents for each transformation (do not concern yourself with solvents). (18 points)



Question 12 (EXTRA CREDIT SYNTHESIS QUESTION) Propose a synthesis of hexamethylcyclopropane using propyne as your starting material. You may use any reagents of your choosing, but all of the carbon atoms in the final product **MUST** come from propyne. Show all intermediates and reagents for each transformation (do not concern yourself with solvents). (15 points)



Question 13 (EXTRA CREDIT MECHANISM QUESTION) Propose a reasonable mechanism that accounts for the transformation shown in the box below – SHOW ALL STEPS. (15 points)



This is an example of what kind of reaction? _____

What is the driving force?

Chem 30B Fall 2003
Stuart Cantrill
Department of Chemistry & Biochemistry
UCLA
Los Angeles
CA 90095-1569

Put Stamps Here

To: